























Application_Grade-3_Scaled Pictographs

Interpretation of Pictographs

PICTOGRAPH




















Use the pictograph to answer the questions below.
The graph shows how many apples each child picked.



Hannah	    
Peter	    
Mary	       
Andrew	  



















- Who picked the most apples? _____
- Which two children picked the same amount? _____
- Who picked the least amount of apples? _____
- How many more apples did Hannah pick than Andrew? _____
- How many fewer apples did Andrew pick than Mary? _____

The pictograph shows number of presents received by four children during Christmas. Use the pictograph to answer the questions.


Sarah	    
Mona	  
Orly	   
Tim	      


- Who received the most presents?
- How many presents did Mona get?
- Who received five presents?
- What is the total number of presents received by the children during Christmas?





Treats at the Bakery	
cupcakes	   
pies	     
cookies	  
cake	    

How many treats are there?





1. 

2. 





3. 

4. 

5. Which treat has the most?

6. Which treat has the least?

7. How many cupcakes and cookies are there altogether?