























Advance_KinderGarden_Addition up to 10

Count the total objects

		WORKING OUT
1)	I buy 3  on Monday. I buy 1  on Tuesday. I buy 2  on Wednesday. How many  in total? _____	
2)	There are 4  . There are 3  . There is 1  . What is the sum? _____	
3)	Flame has 2  . Tyger has 3  . Sally has 4  . How many in all? _____	
4)	The bakery sells 2  on Monday, 5  on Tuesday and 3  on Wednesday. How many  in total? _____	
5)	Captain has 4  . Sally has 2  . Newton has 4  . How many  in total? _____	