













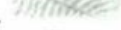










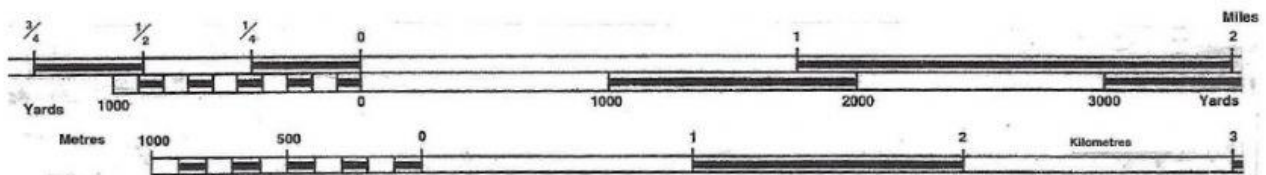
# MAP WORK EXERCISE

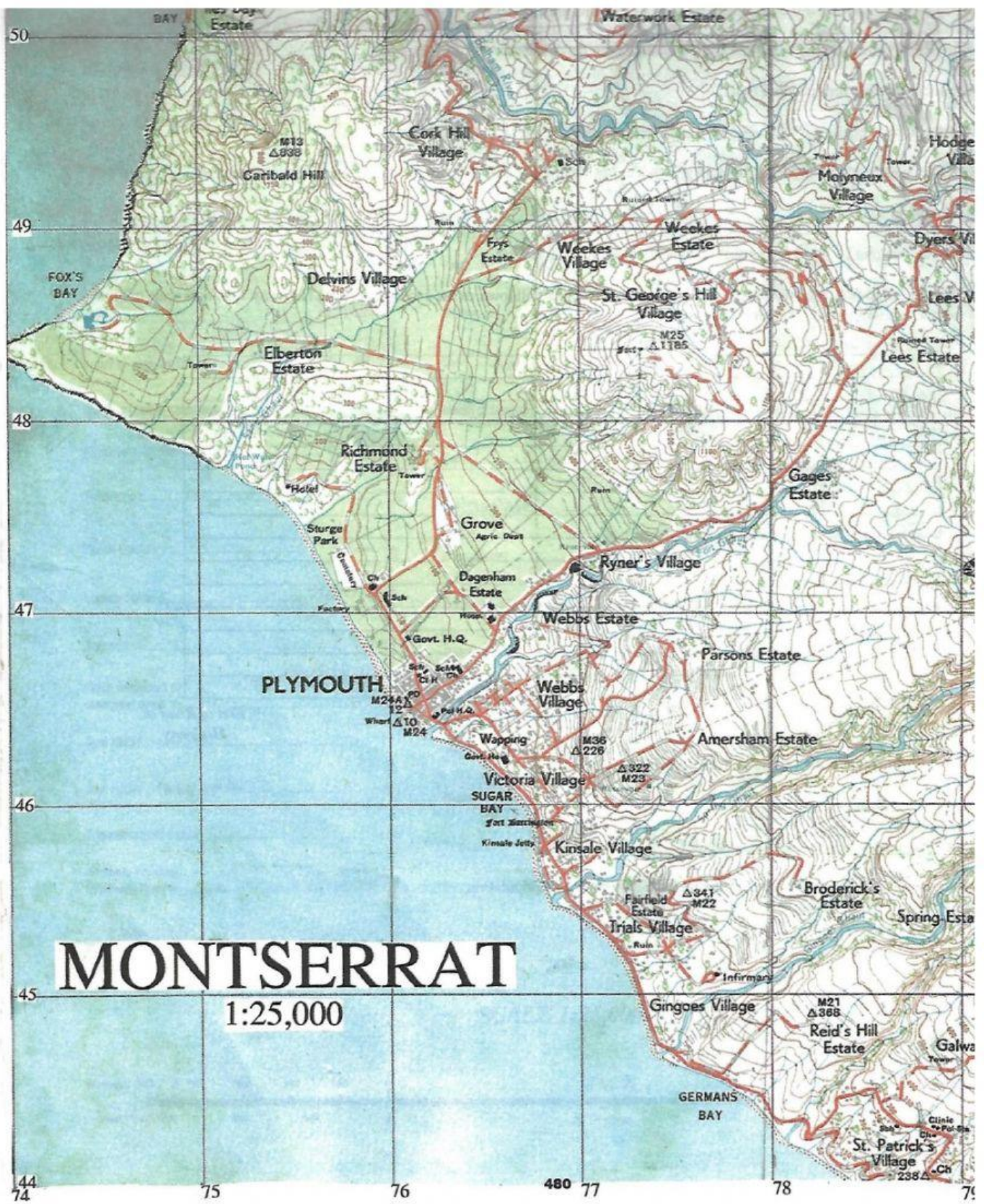
Please study the Map of Montserrat on a scale of 1:25,000 then complete the following exercise.

Main motable Roads.....	 Bridge	Trigonometrical Stations:- Main .....	
Secondary motable Roads.....		Trigonometrical Stations:- Minor .....	
Other Roads and Track (non motable)		Heights in feet given to ground level .....	<b>-101</b>
Footpaths.....		Contours (Vertical Interval 50') .....	
Named Buildings .....		Forest, Thicket and Scrub Woodland .....	
Police Station .....	 Pol Sta	Dispersed trees amongst Settlements .....	
Post, Telegraph Office.....	 PT	Hedges and Terraces .....	
Hospital .....	 Hosp	Cliffs, Scree and Land-slips .....	
Church, Chapel, School .....	 Ch  Cha  Sch	Plantations (Sugar Cane, Limes, Coconuts etc.) .....	
Court House, Hotel .....	 Ct H  H		
Fences, Walls .....			
Water Tank .....	 WT		



**SCALE 1:25,000**





What is the grid reference of the following places?

	Place	4 figure grid reference	6 figure grid reference
1	Richmond Estate Hotel		
2	Mouth of Sand Ghaut river		
3	Mouth of Fort Ghaut River		
4	M36 $\triangle$ 226		
5	Trails Village Ruin		
6	St. Patrick Village Ch.		
7	St. Patrick Village $\triangle$ 238		

State what is located at the following 6 figure grid references:

	6 figure grid reference	Place
1	773484	
2	754494	
3	788440	
4	776455	
5	770463	
6	769494	
7	789441	
8	773453	