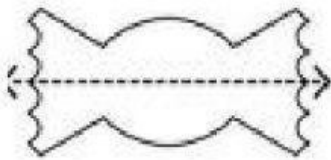


Name: _____


Symmetry

Tell whether the dotted line on each shape represents a line of symmetry. Write **YES** or **NO**.


a.



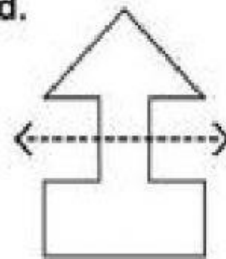
b.



c.




d.




Draw a line of symmetry on each shape.

e.



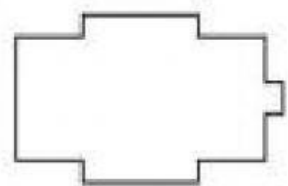
f.



g.



h.



Draw the second half of each symmetrical shape.


i.



j.



k.



l.

