



Worksheet No. 1

Quarter: 1st

Subject: Science 2

Subject Teacher: Ms. Precious Jannine Del Rosario

Name: _____

Grade and Section: _____

Intended Learning Outcome/MELC:

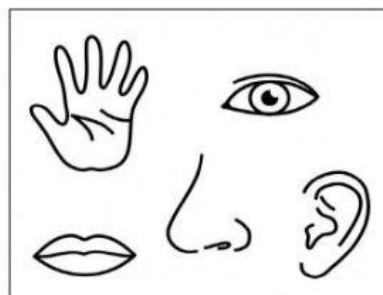
Identify the sense organs and senses that work together during certain activities then explain how these sense organs work together.

Worksheet 1.1: Click two or more sense organs that work together in each picture.

1.



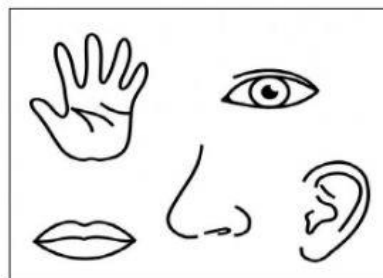
Watching Television




2.



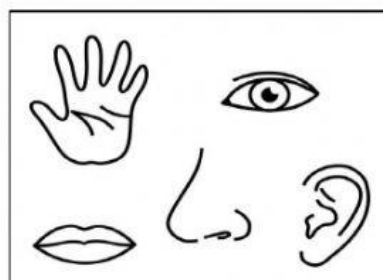
Eating



3.



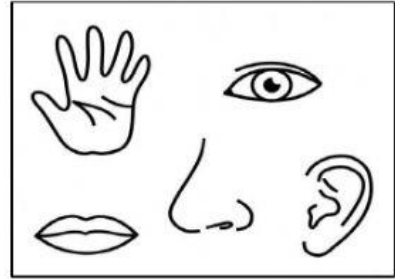
Listening while reading



4.



Picking flowers



5.



Baking

