


UNITS 1-2 REVISION

Mark the correct answers with a ✓.

Look at the image and answer questions 1-3.



1 What are structures c and d?

- A. Stem and roots.
- B. Flower and leaves.

2 Which part is responsible for absorbing water?

- A. b.
- B. d.

3 Which part keeps the plant vertical?

- A. c.
- B. d.

4-

Which of these is a type of seed?

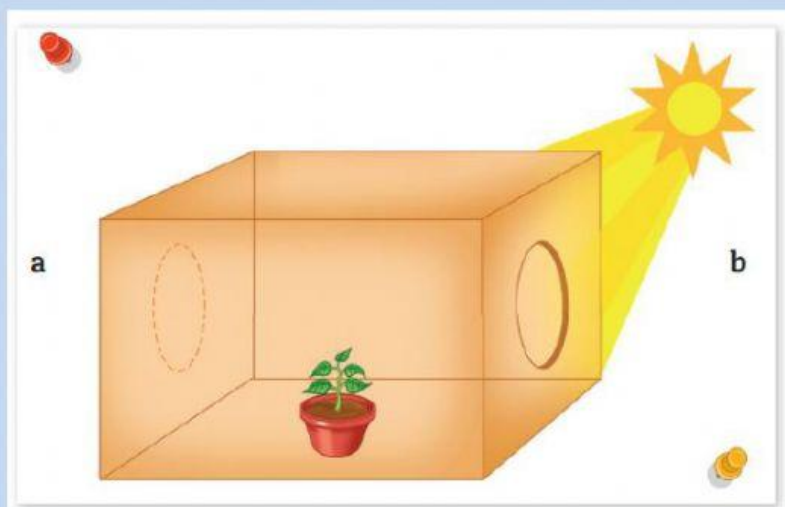
A. Lentils



B. Apple



5- LOOK AT THE PICTURE:




In which direction will the plant grow?

A. Toward a.

B. Toward b.

6- LOOK AT THE PICTURES:



What type of plant is the plant in group 1?

- A.** A bush
- B.** A grass.

7-

What group is this plant part of?



- A.** Group 1.
- B.** Group 2.

8-

Which of these is a fruit?

A. Almonds



B. Sunflower seeds



9-

Look at the images.



What characteristics do they share?

- A.** They are both living things.
- B.** They are both nonliving things.

10-

Look at the images.



Koala 1



Koala 2

Which koala is a living thing?

- A.** Both.
- B.** Only koala 1.

11-

Look at the images.



Which of these can spend a long period of time in a sealed plastic bag?

- A. The squirrel.
- B. The calculator.

12-

What kind of animal is this?



- A. Wild.
- B. Domestic.

13-

What kind of habitat does this animal live in?



- A.** Aquatic.
- B.** Terrestrial.

14-

According to its reproduction, how is this animal classified?



- A.** Viviparous.
- B.** Oviparous.

15-

Which of these animals is a quadruped?

A.



B.

