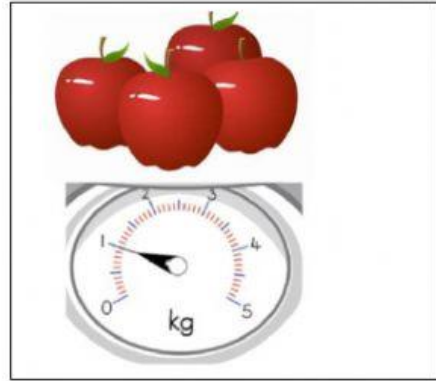


4 apples have a mass of 1 kg.

What is the mass of 2 apples g or kg


What is the mass of 1 apple g or kg



Sarah has 4 apples. If Sarah needs 1.5 kg of apples for a recipe, how many more apples will she need?

Sarah needs 750g of bananas to make a banana cake. She puts 4 bananas on a scale.


How many more bananas does she need?



2 and $\frac{1}{2}$ apples are put on a scale. Sarah only needs 750 g of apples for her recipe.

How many apples will she need?

Use decimals not fractions.



Sarah puts a cup of flour on the scales.

She needs 1.25 kg for a recipe.

How many cups of flour will she need?

Write any fractions as a decimal.

