


1 Read and draw the times on the clocks.




It's three o'clock.




It's half past two.



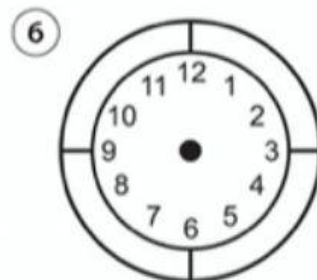
It's quarter past eight.



It's quarter to ten.



It's eleven o'clock.



It's half past nine.

2 Look at the clocks and write the times.



It's quarter past four.



It's _____.





