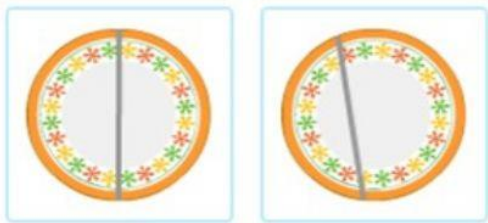





FRACTION

Instruction: Answer the question below

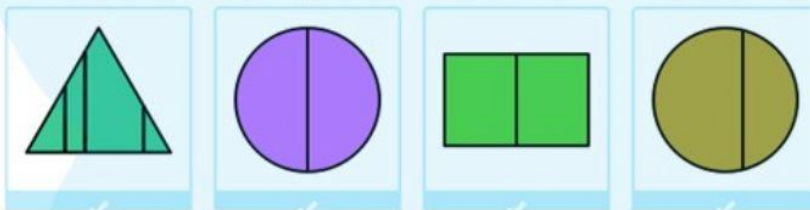
1. Which figure shows halves?



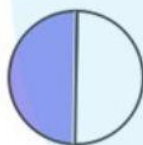
2. Which figure shows fourths?



3. Select all the picture that shows equal parts.



4. What fraction of the shape is purple?



$$\frac{1}{2}$$

$$\frac{1}{4}$$

$$\frac{1}{3}$$

$$\frac{1}{5}$$

5. Which shape show the fraction $\frac{1}{3}$

