

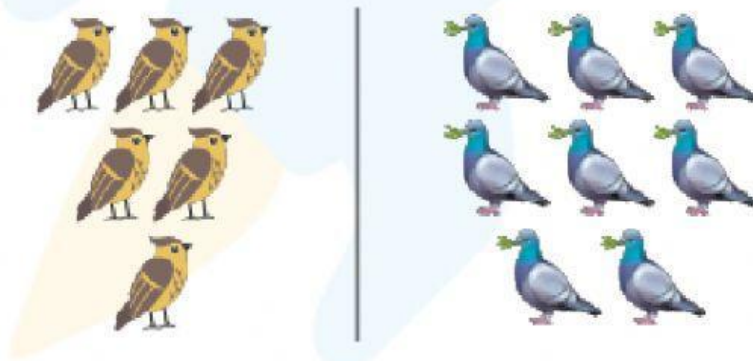
More and Less Worksheets for Kindergarten

Q.1. Circle the box having more balloons.



Q.2. Arrange 8, 3, 2 and 5 in ascending order.


Q.3. Circle the group of birds which is less in number.



Q.4. Which house has more windows?




Q.5. Tick (✓) which box has less objects.



Q.6. Count the objects and fill the correct symbol ($>$, $<$) in the circle.



Q.7 Circle the dice having less numbers of dots.



Q.8. Tick (✓) the correct option from the following.

- a. 7 is less than 5.
- b. 9 is more than 4.
- c. 6 is less than 1.
- d. 3 is more than 4.

Q.9. Circle the group which has more number of caps?



Q.10. Which of the following two numbers is less?

- a. 4
- b. 6