

Name: _____ Date: _____

Mathematics
Perimeter Worksheet

1. Find the perimeter of each rectangle.

a) Length = 1000 mm
Width = 750 mm

b) Length = 16.2 m
Width = 6.3 m

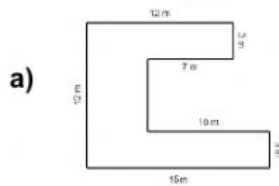
c) Length = 85.4 m
Width = 42.7 m

Perimeter = _____ mm

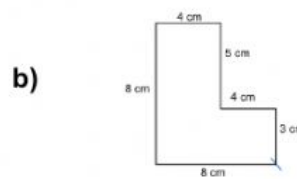
Perimeter = _____ m

Perimeter = _____ m

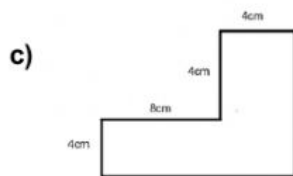
2. Calculate the perimeter of the shapes below.



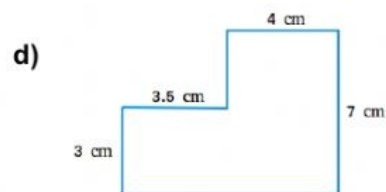
Perimeter = _____ m



Perimeter = _____ cm



Perimeter = _____ cm



Perimeter = _____ cm

3. Read the word problem. Estimate to find which answer makes sense.

A rectangle is 47m long and 24 m wide. What is the perimeter?

about 70 m

about 140 m

less than 100 m

The perimeter of a square is 144 cm. What is the length of each side?

about 12 cm

about 35 cm

more than 40 cm

Created by: Ms. Antonia Bain