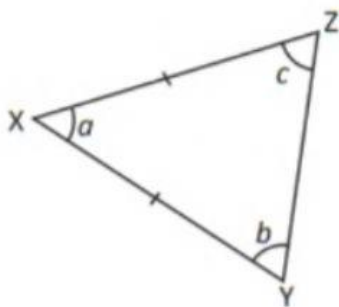


2. XYZ and PQR are isosceles triangles.

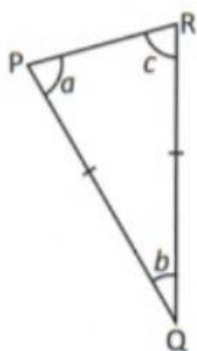
(a)



Which two sides are equal?

Which two angles are equal?

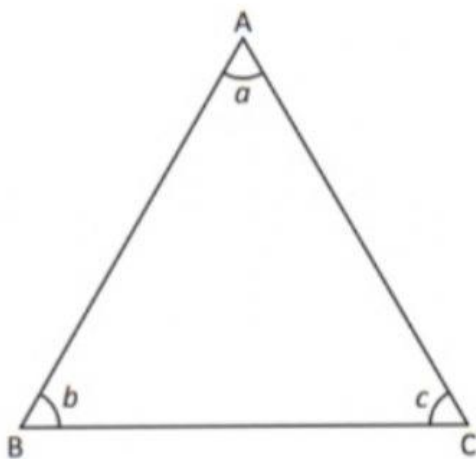
(b)



Which two sides are equal?

Which two angles are equal?

3. ABC is an equilateral triangle.



(a) Which angles are equal to $\angle a$?

(b) Which sides are equal to AB?

(c) What can you say about the angles in Triangle ABC?
