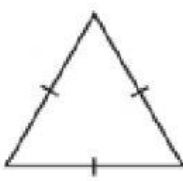

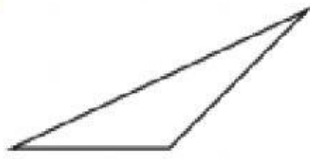

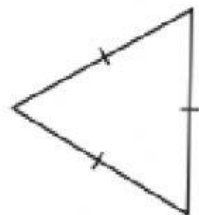
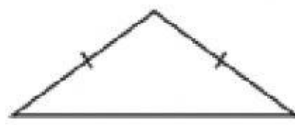

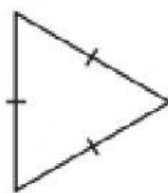


## Application\_Grade-6\_Geometry

### Relationship between the Sides of a Triangle

Identify the triangles as equilateral, isosceles, or scalene.

<p>1)</p>  <p>_____</p>	<p>2)</p>  <p>_____</p>
<p>3)</p>  <p>_____</p>	<p>4)</p>  <p>_____</p>
<p>5)</p>  <p>_____</p>	<p>6)</p>  <p>_____</p>
<p>7)</p>  <p>_____</p>	<p>8)</p>  <p>_____</p>