

# Unit 7 My day

## Lesson 1 : Time

Exercise 1 Look at the clocks and write the correct times.



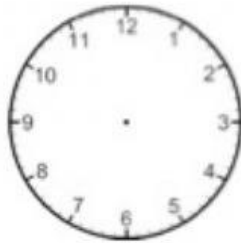
five o'clock



Exercise 2 Draw the time shown on each clock.



a) It's three o'clock.




b) It's six fifteen.



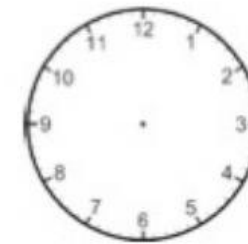
c) It's eleven thirty.



d) It's one forty – five



e) It's seven o'clock.



f) It's nine fifteen.