



JAWAPAN: _____



JAWAPAN: _____

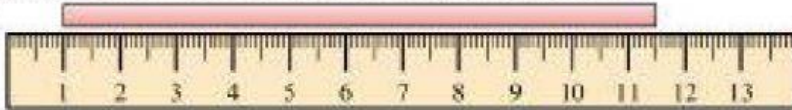


Finding Metric Length

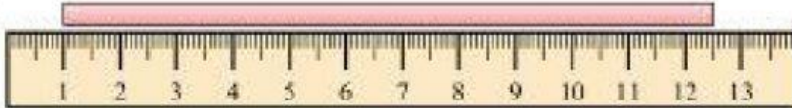
Name: _____

Find the length of each bar. Write your answer in centimeters (cm).


1)



2)



3)



4)



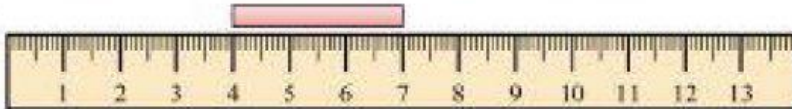
5)




6)



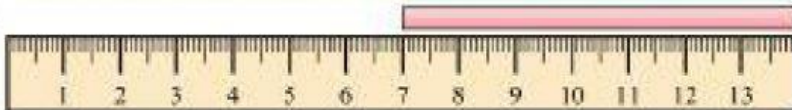
7)



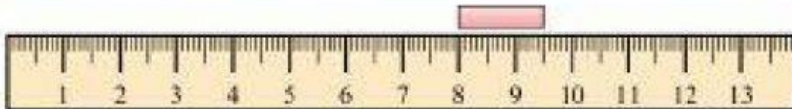
8)



9)



10)



Answers

1. _____

2. _____

3. _____

4. _____

5. _____

6. _____

7. _____

8. _____

9. _____

10. _____