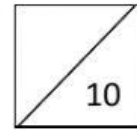


Grade: 2nd Teacher: Mónica Tipán Subject: math

Name: \_\_\_\_\_

Date: \_\_\_\_\_



**INSTRUCCIONES:**

1. Read carefully the instructions.
2. Use pencil or color if it will be necessary.
3. If you have a question or need something, raise your hand and a teacher will come to you.
4. Remember that talking is not allowed at any time in the exam hall.
5. Use your own material.
6. Keep your eyes on your own paper. Remember, copying is cheating!

TIME: 40 minutes


**Skill:** M.2.1.21. Perform additions and subtractions with the numbers up to 99, with concrete material, mentally, graphically, and in a way numerical.

**1. Develop the subtraction**

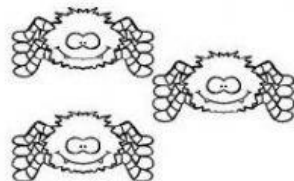
\_\_\_\_/2



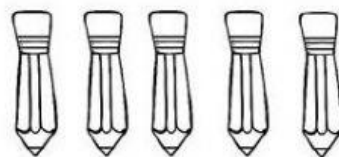
$$3 - 1 = \square$$



$$4 - 2 = \square$$



$$3 - 3 = \square$$



$$5 - 2 = \square$$



$$5 - 4 = \square$$

2. Develop the subtraction without regrouping.

\_\_\_\_/2

$$\begin{array}{r} 1. \quad 77 \\ - 33 \\ \hline \end{array}$$

$$\begin{array}{r} 2. \quad 87 \\ - 54 \\ \hline \end{array}$$

$$\begin{array}{r} 3. \quad 46 \\ - 23 \\ \hline \end{array}$$

$$\begin{array}{r} 4. \quad 95 \\ - 72 \\ \hline \end{array}$$

$$\begin{array}{r} 5. \quad 72 \\ - 55 \\ \hline \end{array}$$

$$\begin{array}{r} 6. \quad 93 \\ - 68 \\ \hline \end{array}$$








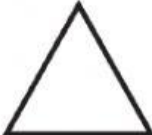
















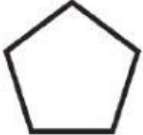

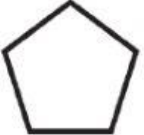


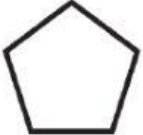
$$\begin{array}{r} 7. \quad 45 \\ - 29 \\ \hline \end{array}$$

$$\begin{array}{r} 8. \quad 82 \\ - 45 \\ \hline \end{array}$$

**Skill:** M.2.2.3. Identify square, triangular, rectangular and circular shapes in geometric bodies of the environment and/or geometric patterns.

3. Circle the shape that come next.

\_\_\_\_/2

4. Observe and write the next numbers.

\_\_\_\_/2

25 30 35 40

61 63 65 67

88 90 92 94

44 48 52 56

71 73 76 78 81

4 14 24 34

63 65 67

71 63 65

5. Observe and label the figures.


\_\_\_\_/2




.....



.....



.....




.....




.....



.....



.....



.....

**Rectangle**  
**Star**

**Triangle**  
**Hexagon**

**Square**  
**Oval**

**Pentagon**  
**Circle**

Done by: Miss Mónica Tipán	Approved by:
Date: Tuesday, May 24 <sup>th</sup> , 2022	Date: