

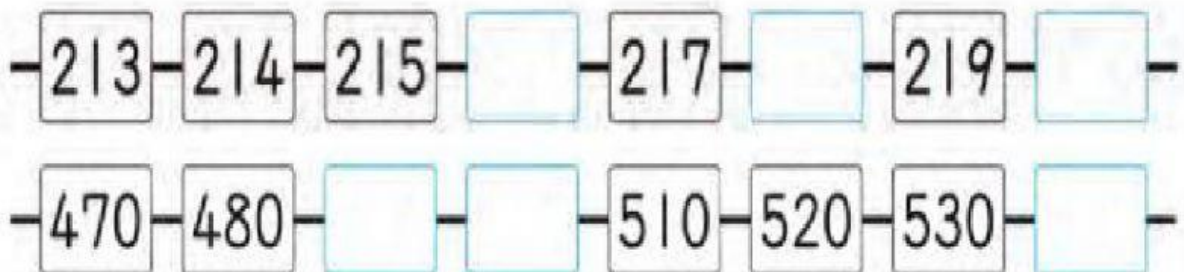


# Codeyoung

Application \_ Grade 3\_ Number System  
Numbers up to 1,000

Q1)

Let's fill in each  with a number.



Q2) Which number is larger?

1} 768

786

2} 654

604

3} 908

980

4} 321

302

5} 897

978



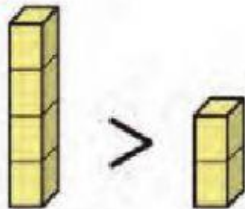
# Codeyoung

## Application \_ Grade 3\_ Number System Numbers up to 1,000

23

Let's compare the sizes of the numbers.

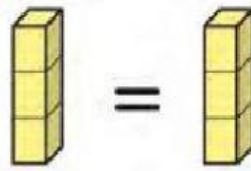
1



$$4 > 2$$

4 is  than 2.

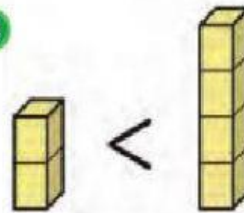
2



$$3 = 3$$

3 is the  size as 3.

3



$$2 < 4$$

2 is  than 4.

### Q3) Write the number.

③ The number when two hundred, fifty and four added together

is .

④ The number when 3 sets of 100, 8 sets of 1 added together

is .



# Codeyoung

Application \_ Grade 3\_ Number System  
Numbers up to 1,000

## Q4) Match the following.

|     |                          |
|-----|--------------------------|
| 713 | six hundred seventy      |
| 234 | five hundred sixty-seven |
| 098 | three hundred forty-five |
| 670 | nine hundred ninety-nine |
| 504 | seven hundred thirteen   |
| 345 | ninety-eight             |
| 809 | two hundred thirty-four  |
| 567 | five hundred four        |
| 999 | eight hundred nine       |