

SUMMER TERM EXAMINATION 2022

MATHEMATICS

Name: _____ Date: _____

Grade: _____

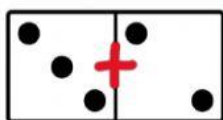
Teachers: Miss Taylor and Miss Mitchell

1. Choose the picture that shows the double fact.

a) $6 + 6$



b) $3 + 2$



c) $5 + 4$



3. Solve the following problem, then choose the correct answer. Show your working.

	Tens	Ones
	3	5
+	2	9

a) 64

b) 22

c) 13

4. Solve the following problem, then choose the correct answer. Show your working.

5	3
2	7

-

- a) 12
- b) 26
- c) 19

5. There are 50 bananas in a bag. Elijah eats 12 of the bananas. How many bananas are left in the bag?

- a) 20
- b) 38
- c) 25

6. Bella has 29 cupcakes. Denise has 27 cupcakes. How many cupcakes do they have altogether?

- a) 37
- b) 10
- c) 56

7. Count on the odd numbers to fill in the missing numbers.

19, 21, __, __, __.

8. Count on the even numbers to fill in the missing numbers.

22, 24, 26, __, __, __.

9. Choose the correct answer to show skip counting by 2s.

2, 4, 6, __, __, __

- a) 10, 15, 20
- b) 8, 10, 12
- c) 7, 8, 9

10. Choose the correct answer to show skip counting by 5s.

20, 25, 30, __, __, __

- a) 25, 32, 35
- b) 31, 32, 33
- c) 35, 40, 45

11. Choose the correct answer to show skip counting by 10s.

10, 20, 30, __, __, __

- a) 40, 50, 60
- b) 40, 60, 80
- c) 35, 40, 45

12. Which figure shows one half shaded?

a.




b.



13. Which figure shows one quarter shaded?

a.



b.



14. What is the fraction for one third?

- a. $\frac{1}{4}$

b. $\frac{1}{3}$

c. $\frac{1}{2}$

15. Jane eats one half of 16 oranges in a week. How many oranges did she eat?



a) 8

b) 9

c) 10

16. Look at the clock. What time is it?



a) 7:00

b) 10:30

c) 12:30

17. The time is _____.



a) half past 3

b) 2 o'clock

c) 7 o'clock

18. It is _____.



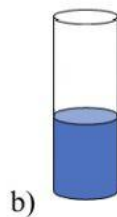

- a) a little after half past 5
- b) a little before 4 o'clock
- c) a little after 3 o'clock

19. It is 7 o'clock in the _____.




- a) morning
- b) afternoon
- c) night


20. Which container holds more?



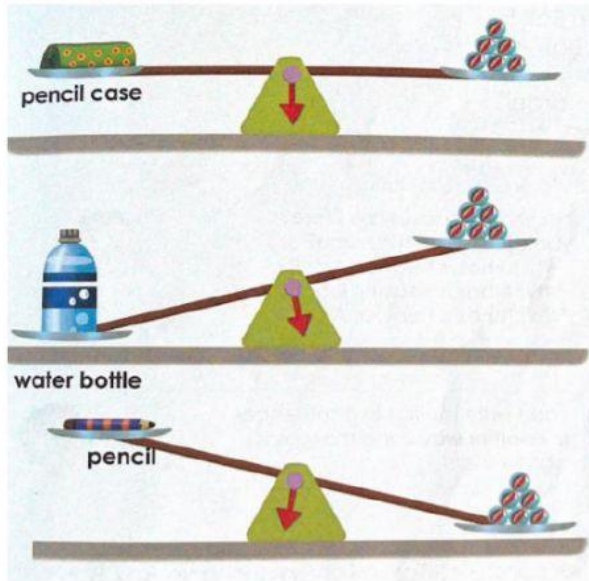
21. Which container has a greater volume of liquid?



22. The volume of the water in the bottle is _____ units.



Use the picture to answer the following questions.




23. The pencil case is _____ than the pencil.

- A. heavier than
- B. lighter than
- C. as heavy as

24. The pencil is _____.

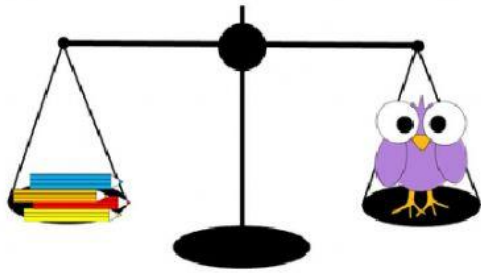
- A. the heaviest
- B. the lightest
- C. lighter than

25. The strawberry is _____ the carrot.




- A. heavier than
- B. lighter than
- C. as heavy as

26. The bird is as heavy as _____ units.



- a) 5
- b) 8
- c) 4

27. This is a picture of a _____.



- a) cube
- b) prism
- c) cuboid

Match the correct solid shape to each clue.



A) sphere

B) cylinder

C) pyramid

28. I have 1 curved surface and 2 flat surfaces. _____

29. I only have one curved surface. _____

30. I do not have any curved surface. I have 5 flat surfaces. _____

31. Draw an object that has a cone shape. Write the name of the object.

32. A man has many eggs. There are 4 rows with 6 eggs in each row. How many eggs were there in all?

a) $4 + 4 + 4 + 4 = 16$

b) $6 + 6 + 6 + 6 = 24$

c) $4 + 6 = 10$

33. There are 5 fingers on a hand. How many fingers are there on 2 hands?

a) $5 + 5 = 10$

b) $5 + 2 = 7$

c) $2 + 2 = 4$









34. Solve the multiplication problem.

$2 \times 12 = \underline{\hspace{2cm}}$

Tally chart

The tally chart shows the insects Jacob saw when he went on a scavenger hunt. Use the tally chart to answer the questions.

INSECT SCAVENGER HUNT TALLY CHART

Insect	Tallies
Ladybug 	
Ant 	
Butterfly 	
Mosquito 	

35. How many mosquitoes did Jacob see?

a) 8

b) 12

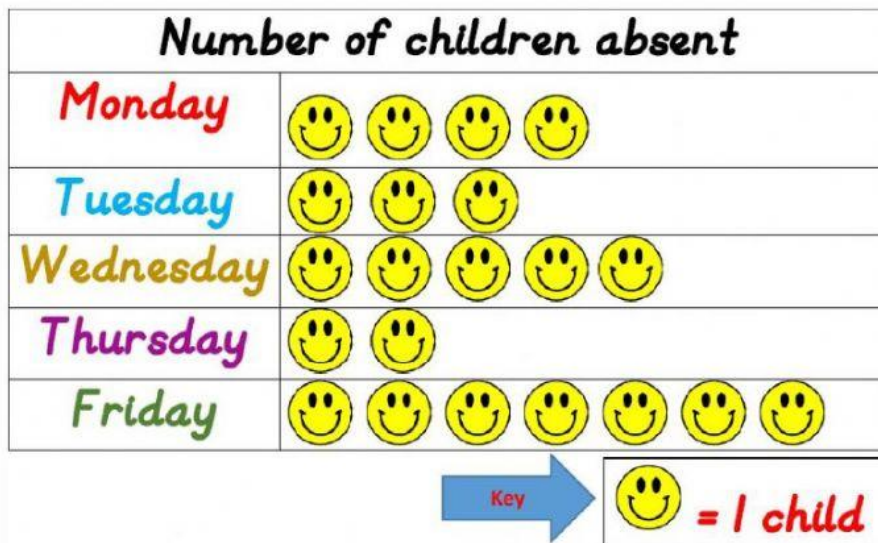
c) 10

36. Jacob saw _____ more ants than mosquitoes.

37. Jacob saw _____ fewer butterfly than ladybugs.

Pictograph

The pictograph shows the number of children absent during the week. Use the pictograph to answer the following questions.



38. How many children were absent on Friday?

- a) 10
- b) 7
- c) 12

39. On which day were three children absent?

- a) Monday
- b) Tuesday
- c) Wednesday

40. There were _____ fewer students absent on Thursday than Wednesday.

- a) 3
- b) 5
- c) 7