

Nombre:





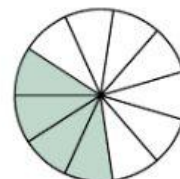
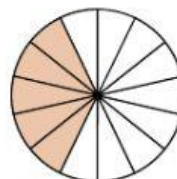
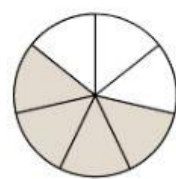
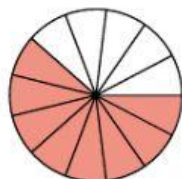



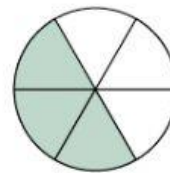
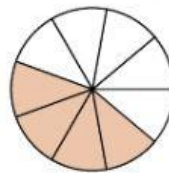
Fecha:



Colegio:


Curso:

1. Ordena las siguientes fracciones de menor a mayor y a continuación completa la tabla.



2. Colorea en cada figura la fracción que se indica

①  $\frac{1}{4}$



②  $\frac{3}{6}$



③  $\frac{6}{6}$

