

Name: _____
Date: Wednesday, June 1st, 2022
Subject: Mathematics Assessment
Grade: _____

1. Choose the correct answer to show skip counting by 2s.

12, 14, 16, __, __, __

- a) 10, 15, 20
- b) 18, 20, 22
- c) 17, 18, 99

2. Choose the correct answer to show skip counting by 2s.

10, 8, 6, __, __, __

- a) 7, 8, 10
- b) 8, 0, 2
- c) 4, 2, 0

3. Choose the correct answer to show skip counting by 5s.

30, 35, 40, __, __, __

- a) 25, 32, 35
- b) 31, 32, 33
- c) 45, 50, 55

4. Choose the correct answer to show skip counting by 10s.

50, 60, 70, __, __, __

- a) 80, 85, 90
- b) 40, 60, 80
- c) 80, 90, 100

5. Choose the correct answer to show skip counting by 10s.

70, 60, 50, __, __, __

- a) 10, 20, 30
- b) 40, 30, 20
- c) 0, 10, 90


6. There are 5 rows with 4 eggs in each row. How many eggs were there in all?

- a) $4 + 4 + 4 + 4 + 4 = 20$
- b) $5 + 4 + 4 + 4 = 17$
- c) $5 + 4 = 9$

7. There are 5 fingers on a hand. How many fingers are there on 5 hands?

- a) $5 + 5 + 5 + 5 + 5 = 25$
- b) $5 + 5 = 10$
- c) $2 + 5 = 7$

8. There are _____.



















- a) 4 rows of 4 dots
- b) 3 rows of 5 dots
- c) 3 rows of 3 dots

9. Solve the multiplication problem.

$$2 \times 11 = \underline{\hspace{2cm}}$$

Use the information from the pictograph to answer the following questions.

Name	Number of Cheeseburgers eaten
Michael	    
Tara	 
John	   
Sara	
Jacob	  

Each  represents 1 cheeseburger eaten.

10. How many cheeseburgers were eaten by Jacob? _____ cheeseburgers

11. _____ ate the least number on cheeseburgers.

12. John ate _____ more cheeseburgers than Tara.

- a) 3
- b) 4
- c) 2

13. Jacob ate _____ more cheeseburgers than Sara.

- a) 3
- b) 2
- c) 5

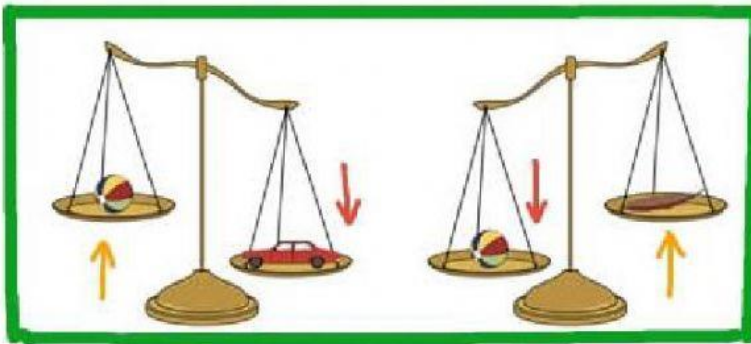
14. Sara ate _____ fewer cheeseburger than Tara.

15. The teddy bear is _____ 10 units.



- a) lighter than
- b) heavier than
- c) as heavy as

Use the scales to answer the following questions.



16. The ball is _____ the car.

- a) heavier than
- b) lighter than
- c) as heavy as

17. The feather is _____ the ball.

- a) heavier than
- b) lighter than
- c) as heavy as

18. The car is the _____.

- a) as heavy as
- b) the lightest
- c) heaviest

19. The feather is the _____.

- a) lightest
- b) heaviest
- c) heavier than

20. Choose the correct answer that orders the objects from the lightest to the heaviest.

- a) feather, ball, car
- b) ball, car, feather
- c) car, ball, feather