


## REVIEW – MATHS 2nd

**Question 1:** How many fingernails can be counted from 3 pairs of hands?

- a. 10      b. 100      c. 30      d. 28



**Question 2:** The difference between 20 and 9 is.....

- a. 22      b. 11      c. 13      d. 29

**Question 3:** Who is  $30 + 5$ ?

- a. I'm 27      b. I'm 35      c. I'm 50      d. I'm 23

**Question 4:** Which array can match?



- a.  $3 + 3 + 3$       b.  $3 \times 3 \times 3$       c.  $9 + 9$       d.  $4 + 4 + 4$

**Question 5:** Find the difference between: 40 and 20

- a. 20      b. 60      c. 30      d. 10

**Question 6:** Find the difference between: 65 and 10

- a.  $65 - 10 = 55$       b.  $65 + 10 = 75$       c.  $65 + 10 = 85$       d.  $65 - 0 = 65$

**Question 7:** Kim has 30 candies; Ken gave her 5 more. How many candies were there in total?


- a.  $30 - 5 = 25$       b.  $30 + 5 = 35$       c.  $5 + 5 = 10$       d.  $30 + 30 = 60$

**Question 8:** Find the matching number sentence



- a.  $16 - 4 = 10$       b.  $10 - 6 = 4$   
c.  $10 + 6 = 16$       d.  $16 - 6 = 10$

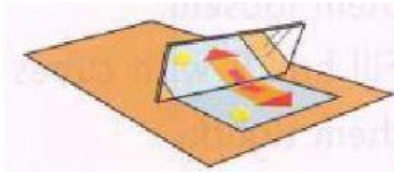
**Question 9:** Are these lines of symmetry?



A. Yes

B. No

**Question 10:** Choose the correct answer




A. line of symmetry

B. Reflection

C. Fold

D. Mirror line

**Question 11:** How long is this?



A. one metre

B. one litre

C. one centimetre

D. one kilometre

**Question 12:** What shape is it?



A. Pentagon

B. Hexagon

C. Circle

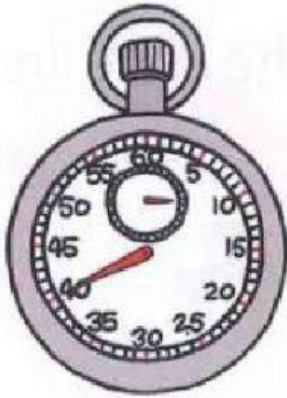
D. Triangle

**Question 13.** What is this?



- A. sandcastle
- B. one-minute sand timer
- C. clock
- D. jar

**Question 14.** How many seconds is shown on the stopwatch?



- A. fourteen
- B. fourteen
- C. fouty
- D. forty

**Question 15:** How many lines of symmestry?



- A. 4
- B. 5
- C. 10
- D. 6

**Question 16.** Which is balanced?



**Question 17:** This is the **number pair to 20**.  
number?

4

?

Find the missing

- a. 24                      b. 16                      c. 14                      d. 15

**Question 18:** Which number below is less than 307?

- a. 308                      b. 407                      c. 703                      d. 233

**Question 19:** Which number below is the odd one out?

- a. 2                      b. 7                      c. 9                      d. 11

**Question 20:** Which number sentence below is incorrect?

- a.  $8 < 9$                       b.  $4 = 2+2$                       c.  $15 > 2$                       d.  $180 < 108$

**Question 21:** Which number below is a multiple of 3?

- a. 5                      b. 15                      c. 20                      d. 100

**Question 22:** Gopal ran the race in *12 seconds*

Vishni ran the race in *22 seconds*

Dinesh ran the race in *10 seconds*

Ajit ran the race in *15 seconds*

Who wasn't the winner?

- a. Gopal      b. Vishni      c. Dinesh      d. Ajit

**Question 23:** Mary is 120cm tall

Cherry is 125cm tall

Ben is 130cm tall

Lucy is 123cm tall

Who is the tallest?

- a. Mary      b. Ben      c. Cherry      d. Lucy

**Question 24:** Which banknote has the highest value?

a.



b.



c.



d.



**Question 25:** If I use a \$10 bill to pay for something that costs \$8, how much change would I get?

- a. 3
- b. 4
- c. 5
- d. 2

**Question 26:** If an ice cream costs \$2, and I get \$3 change, what banknote did I use?

- a. \$6
- b. \$5
- c. \$8
- d. \$10

**Question 27:** If I wanted to buy a sandwich \$3, a bottle of water \$1 and a banana \$0.25. How much would it cost me?

- a. \$5
- b. \$4
- c. \$4.25
- d. \$3

**Question 28:** Chose the correct pattern that the numbers are ordered from the smallest to the largest?

- a. 12, 32, 23, 45, 56
- b. 34, 43, 56, 65, 71
- c. 32, 38, 54, 45, 63
- d. 14, 23, 32, 45, 39

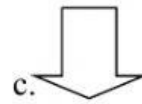
**Question 29:** How many grams on this scale?



- a. 200g
- b. 300g
- c. 2000g
- d. 20g



**Question 30:** Odd one out



## Writing

**Question 1:** Write the array:



.....

**Question 2:** Write next numbers:

15	25	.....	45	55	.....	75
----	----	-------	----	----	-------	----

**Question 3:** What shape is this?



.....

**Question 4:** Order these numbers from the **largest to the smallest**?

45, 98, 64, 57, 82, 70

.....

**Question 5: LOOK, READ AND WRITE T (TRUE) OR F (FALSE)**

0. 10 and 101 is a number pair to 201.

F

1. 607 is less than 609.

\_\_\_\_\_

2. 45 is greater than 35.

\_\_\_\_\_

3. 24 is a double of 11.

\_\_\_\_\_

**Question 6: FILL IN THE LESS THAN SIGN (<) OR GREATER THAN SIGN (>) IN THE SUITBLE BLANK.**

0.  $77 \square 22$

1.  $29 \square 35$

3.  $179 \square 174$

2.  $11-5 \square 3+7$

4.  $9+12 \square 15+4$

**Question 7 : SOLVE THE NUMBER STORY BELOW.**

Anna went to the supermarket to buy 10 eggs for her mom. On way back home, she met her grandma. She got 120 eggs from her grandma. Later, a neighbor gave her 35 eggs and 10 carrots.

How many eggs in total did Anna bring home?

---

---