


CONFRONTO TRA FRAZIONI

FRAZIONI CON LO STESSA DENOMINATORE

ESERCIZIO


INSERISCI IL SEGNO > O <



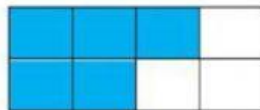
$$\frac{5}{9}$$



$$\frac{7}{9}$$



$$\frac{6}{8}$$



$$\frac{5}{8}$$




$$\frac{5}{6}$$



$$\frac{1}{6}$$



$$\frac{7}{10}$$



$$\frac{9}{10}$$













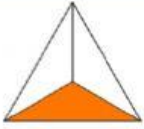
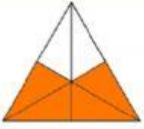








Frazioni con lo stesso denominatore

Se due frazioni hanno lo stesso denominatore allora è più grande la frazione con il numeratore più grande.

L'unità frazionaria

- Scrivi accanto ad ogni figura la frazione corrispondente alle parti colorate.

 —	 —	 —	 —	 —
 —	 —	 —	 —	 —
 —	 —	 —	 —	 —
 —	 —	 —	 —	 —