


IL PERIMETRO

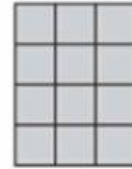
Calcola il PERIMETRO dei seguenti poligoni. Osserva l'esempio.



$$P = 14 \text{ ┐ ┌}$$



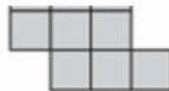
$$P = \dots\dots \text{ ┐ ┌}$$



$$P = \dots\dots \text{ ┐ ┌}$$



$$P = \dots\dots \text{ ┐ ┌}$$



$$P = \dots\dots \text{ ┐ ┌}$$



$$P = \dots\dots \text{ ┐ ┌}$$