
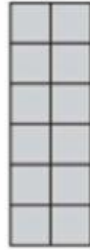


IL PERIMETRO


Calcola il PERIMETRO dei seguenti poligoni. Osserva l'esempio.



$P = 14$




$P = \dots\dots$



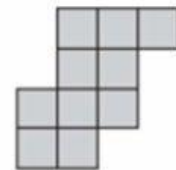
$P = \dots\dots$



$P = \dots\dots$



$P = \dots\dots$



$P = \dots\dots$