

# Review Our Universe

1. Look And match. Then, write.

satellite

star

planet




It moves around  
a planet.

It moves around  
a star.

It gives out light  
and heat.

2. Read and choose the correct answer








Sun




Earth



Moon

-  Planets move around it in the Solar System.
-  It sometimes looks like the letter C.
-  Most of it is covered with water.
-  It is the planet where we live.
-  It is a star.





3. Read the questions about the Solar System, Circle the correct answer.



- How many planets move around the Sun?
- Which planet is the smallest?
- Which planet is the biggest?
- Which planet has got rings?
- Which one is a star?

10 / 8

Mercury / Jupiter

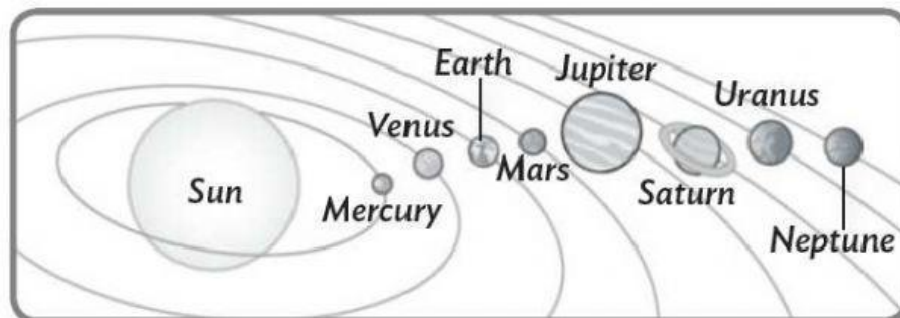
Jupiter / Venus

Saturn / the Earth

the Moon / the Sun



4. Look at the Solar System and complete the sentences.



rings Neptune Mercury near Uranus biggest red

Mercury is very \_\_\_\_\_ the Sun. Venus is between \_\_\_\_\_ and the Earth. Mars is the \_\_\_\_\_ planet. Jupiter is the \_\_\_\_\_ planet in the Solar System. Saturn has \_\_\_\_\_. \_\_\_\_\_ is very cold. \_\_\_\_\_ is very far from the Sun.



twinkl.co.uk

