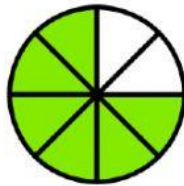
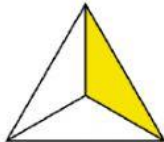





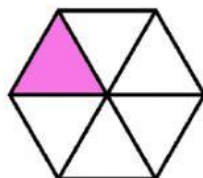
I. Look at the figure on the left and write the fraction form of that figures.

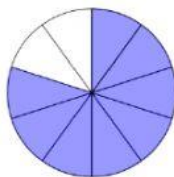


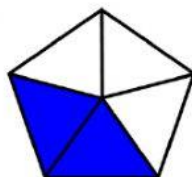


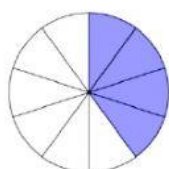


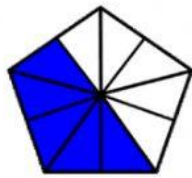


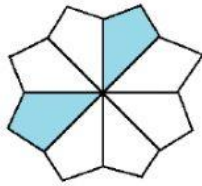


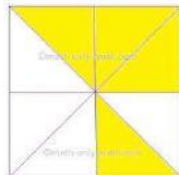




















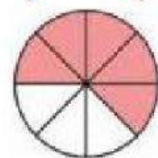


II. Look at the fraction below and connect it with a line to the correct figure.

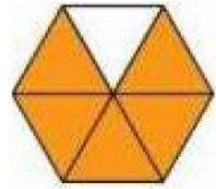
$$\frac{1}{2}$$

$$\frac{1}{3}$$


$$\frac{4}{5}$$



$$\frac{2}{10}$$



$$\frac{5}{8}$$



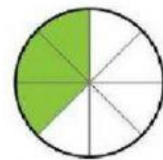
$$\frac{2}{3}$$




$$\frac{1}{4}$$




$$\frac{3}{6}$$



$$\frac{3}{8}$$



$$\frac{5}{6}$$



God Bless You.