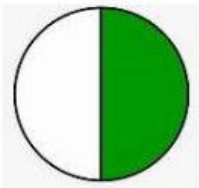


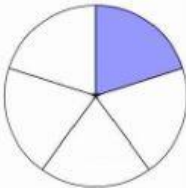


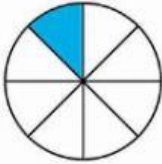


**Fractions : Identify the fraction of the pizza that's shaded.**

Questions	Fractions		Fraction Names
a. You have 1 shaded slice and 2 slices in total.		<div><div></div><div></div></div>	
b. You have 1 shaded slice and 3 slices in total.		<div><div></div><div></div></div>	
c. You have 1 shaded slice and 4 slices in total.		<div><div></div><div></div></div>	
d. You have 1 shaded slice and 5 slices in total.		<div><div></div><div></div></div>	
e. You have 1 shaded slice and 6 slices in total.		<div><div></div><div></div></div>	
f. You have 1 shaded slice and 7 slices in total.		<div><div></div><div></div></div>	
g. You have 1 shaded slice and 8 slices in total.		<div><div></div><div></div></div>	