

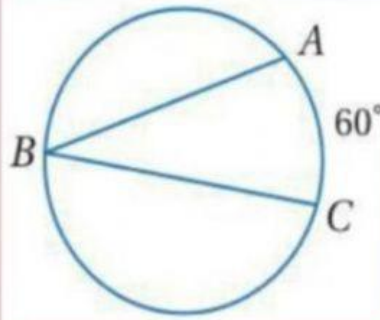
# اسم الطالبة :-

## ورقة عمل درس الزوايا المحيطة (1)

=30

( ✓ )

( ✗ )

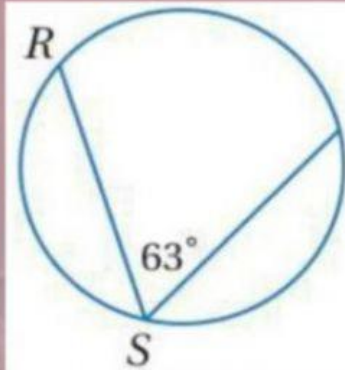


$m\angle B$  (1)

=273

( ✓ )

( ✗ )

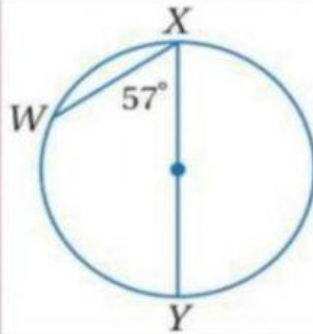


$m\widehat{RT}$  (2)

=67

( ✓ )

( ✗ )

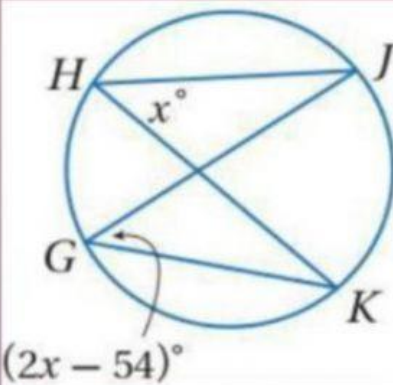


$m\widehat{WX}$  (3)

=84

( ✓ )

( ✗ )



$m\angle H$  (5)