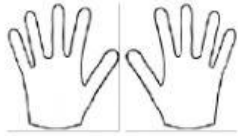


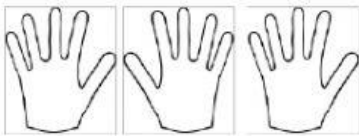


There are 5 fingers
in a hand.

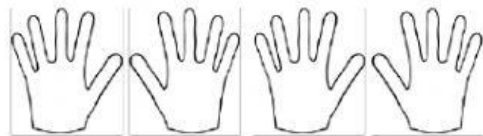
How many fingers are there in 2 hands?



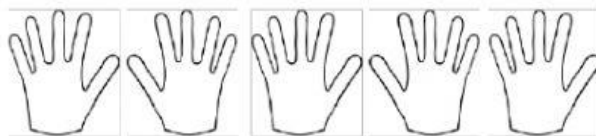
How many fingers are there in 3 hands?



How many fingers are there in 4 hands?



How many fingers are there in 5 hands?



How many fingers are there in 6 hands?

