

Name : _____

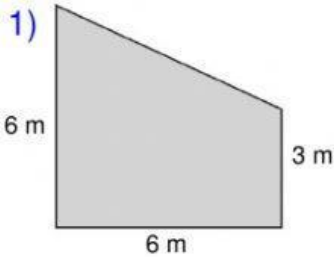
Score : _____

Teacher : _____

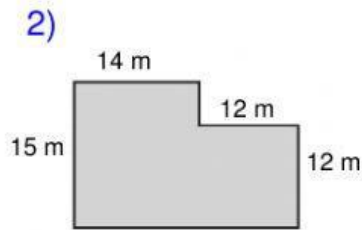
Date : _____

Compound Shapes

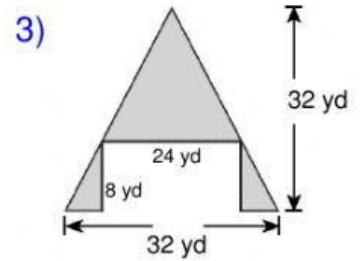
Find the area of each figure, round your answer to the nearest whole number if necessary.



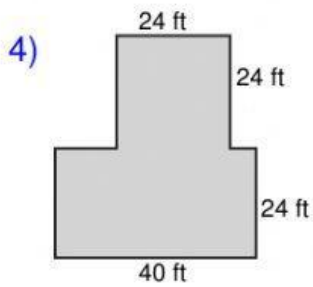
Area: _____ m^2



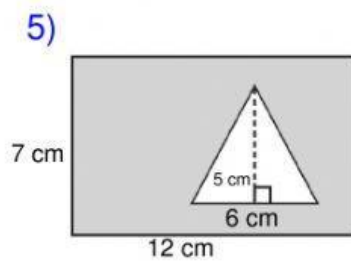
Area: _____ m^2



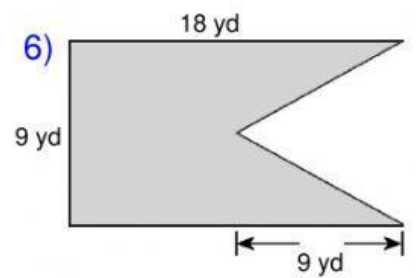
Area: _____ yd^2



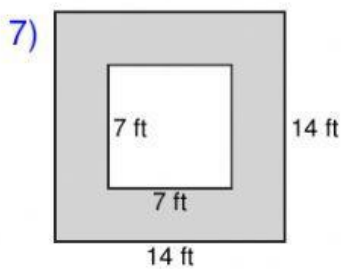
Area: _____ ft^2



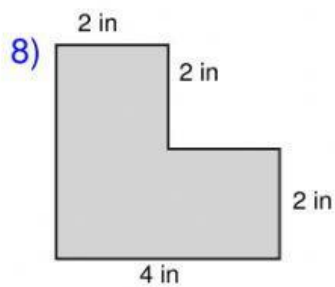
Area: _____ cm^2



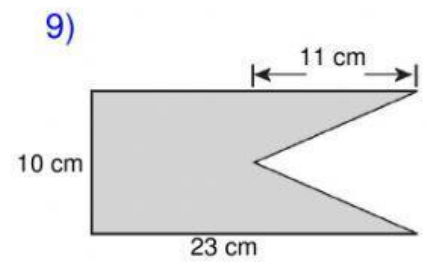
Area: _____ yd^2



Area: _____ ft^2



Area: _____ in^2



Area: _____ cm^2