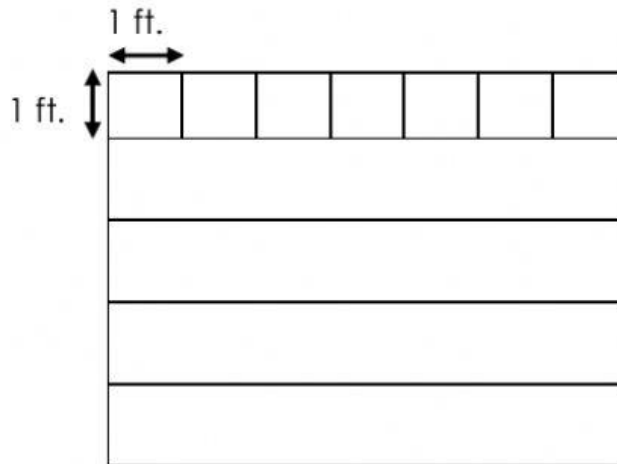


Name: _____

Date: _____

TEKS 3.6C Area of Squares and Rectangles Practice #2

- 1 The model represents a rectangular wall in Hannah's room.



What is the area of the wall in square feet?

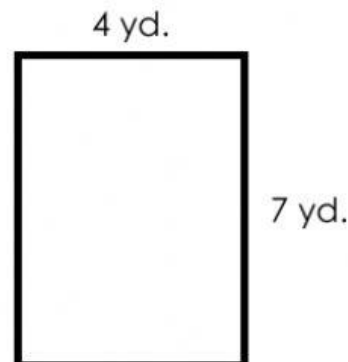
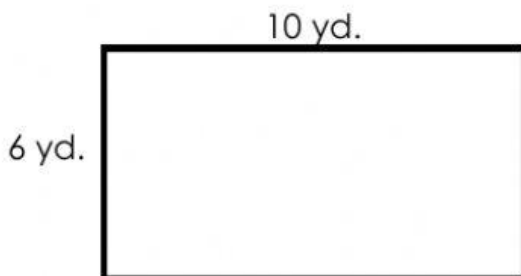
A 35 square feet

C 42 square feet

B 30 square feet

D 24 square feet

-
- 2 The dimensions of two rectangular fields in a park are shown.



What is the difference between the area of the two fields in square yards?

A 60 square yards

B 28 square yards

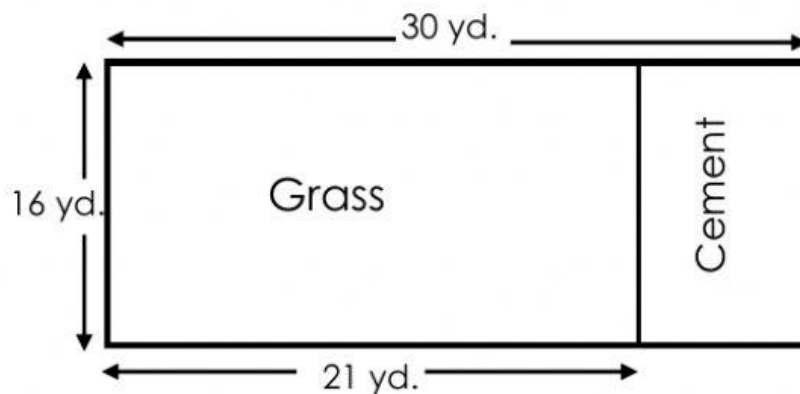
C 88 square yards

D 32 square yards

3 Victor is making a doghouse for his dog Rex. The doghouse has a rectangular floor. The length of the floor is 6 feet, and the width is 5 feet. What is the area of the floor in square feet?

- A 28 square feet
- B 22 square feet
- C 21 square feet
- D 30 square feet

4 The model shows Ricky's backyard. He has rectangular section with grass and a rectangular section with cement.



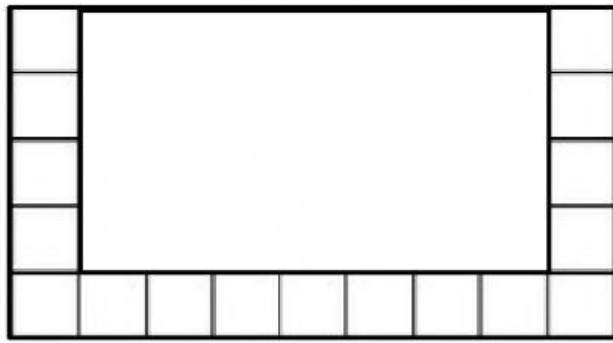
What is the area of the section with cement in square yards?

- A 92 square yards
- B 144 square yards
- C 50 square yards
- D 164 square yards

5 Stephen installed a square countertop in a section of his kitchen. The length of the countertop is 10 inches. What is the area of the countertop in square inches?

- A 20 square inches
- B 110 square inches
- C 100 square inches
- D 90 square inches

6 The model represents Samantha's math textbook.

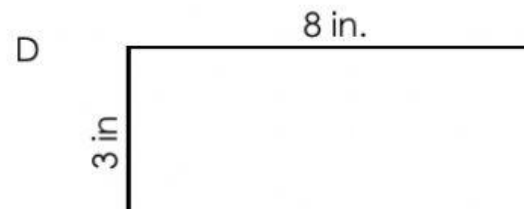
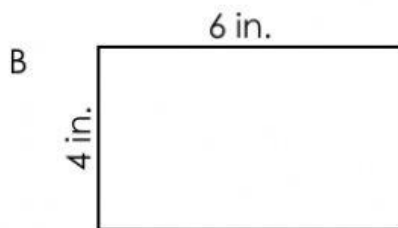
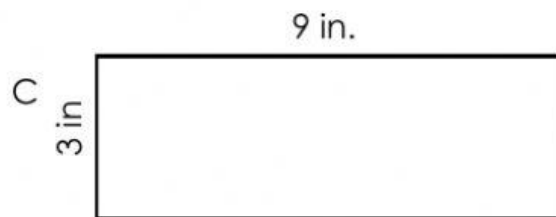



 = 1 square inches

What is the area of the textbook in square inches?

- A 19 square inches
- B 28 square inches
- C 40 square inches
- D 45 square inches



7 A group of rectangles are shown. Which rectangle does NOT have an area of 24 square inches?



8 Eva made a rectangular blanket. The blanket has a length of 7 feet and a width of 6 feet. What is the area of the blanket in square feet?

- A 42 square feet
- B 26 square feet
- C 48 square feet
- D 50 square feet

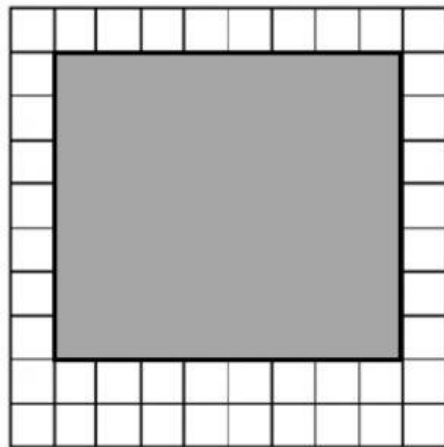
9 Two rectangular models are shown.



Which statement about the area of Figure A and Figure B is true?

- A Figure A has a greater area than Figure B.
 - B Figure B has a greater area than Figure A.
 - C Figure B has an area of 28 square inches.
 - D Figure A and Figure B have equivalent areas.
-

10 The shaded figure represents Teresa's rectangular garden.



 = 1 square yard

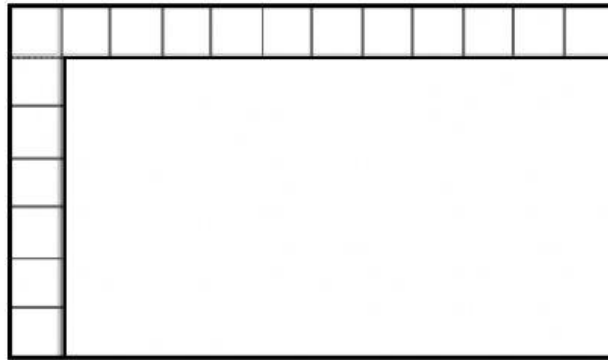
What is the area of the garden in square yards?

- A 64 square yards
 - B 56 square yards
 - C 30 square yards
 - D 54 square yards
-

11 Patricia has a rectangular patio in her backyard. The length of the patio is 18 feet, and the width is 5 feet. What is the area of the patio in square feet?

- A 100 square feet
- B 46 square feet
- C 90 square feet
- D 27 square feet

12 A rectangle is shown.



 = 1 square centimeter

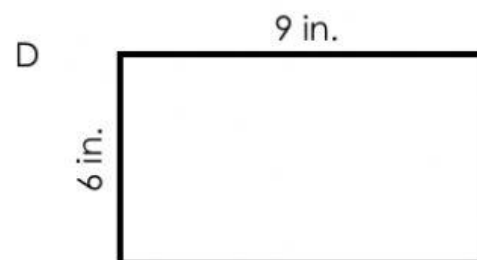

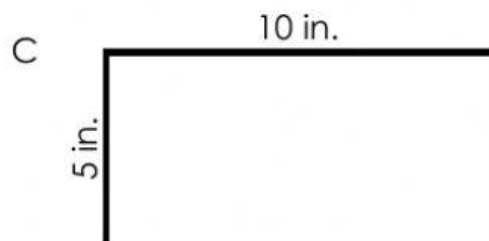
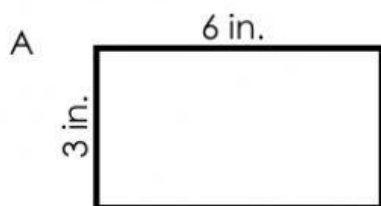
What is the area of the rectangle in square centimeters?

- A 72 square centimeters
- B 84 square centimeters
- C 112 square centimeters
- D 38 square centimeters

13 Three clues about a rectangle are shown.

- I have an area greater than 40 square inches but less than 70 square inches
- My length is twice my width

Which could be the rectangle described by the clues?



14 A square is shown.

8 cm.



What is the area of the square in square centimeters?

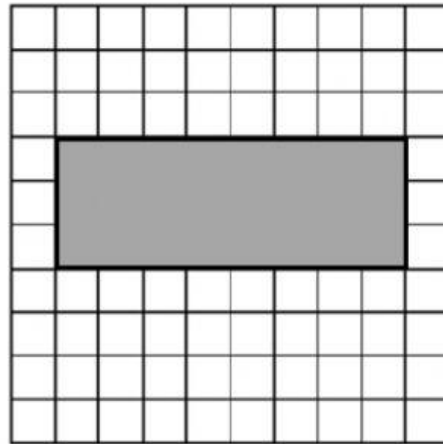
A 64 square centimeters

C 16 square centimeters

B 24 square centimeters

D 49 square centimeters

15 The shaded figure represents a portion of a wall that Adrian will paint.



 = 1 square foot

What is the area of the wall in square feet?

A 22 square feet

C 20 square feet

D 11 square feet

D 24 square feet

16 Christina installed a rectangular window in her house. The length of the window is 14 inches and width is 9 inches. What is the area of the window in square inches?

A 132 square inches

B 46 square inches

C 126 square inches

D 38 square inches