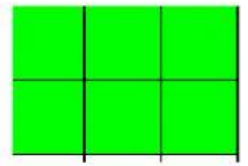
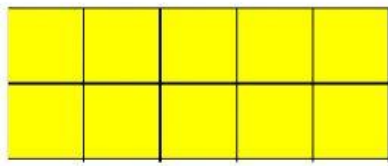



LEGGI TRASCINA I REGOLI CHE INDICANO IL DOPPIO E SCRIVI LE MOLTIPLICAZIONI COME DA ESEMPIO

<div><div><div></div><div></div><div></div><div></div></div><div><div></div><div></div><div></div><div></div><div></div><div></div><div></div><div></div><div></div><div></div><div></div><div></div></div><div><div></div><div></div><div></div><div></div><div></div><div></div></div></div>		
IL DOPPIO DI		
10	<div><div></div><div></div><div></div><div></div><div></div><div></div><div></div><div></div><div></div><div></div><div></div><div></div></div>	10 X 2 = 20
9		X =
4		X =
2		X =



8		X =
5		X =
7		X =
3		X =
6		X =