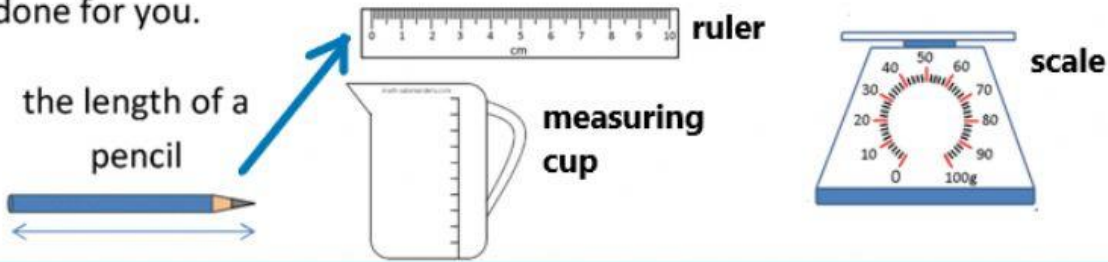









MEASUREMENT MATCH 1

Match the objects with the correct measuring equipment. The first one is done for you.



<p>the amount of liquid in a cup</p>  <p>ruler</p> <p>measuring cup</p> <p>scale</p>	<p>the length of a snail</p>  <p>ruler</p> <p>measuring cup</p> <p>scale</p>
<p>the weight of a shoe</p>  <p>ruler</p> <p>measuring cup</p> <p>scale</p>	<p>the height of a sand castle</p>  <p>ruler</p> <p>measuring cup</p> <p>scale</p>
<p>the amount of water in a bucket</p>  <p>ruler</p> <p>measuring cup</p> <p>scale</p>	<p>the weight of an apple</p>  <p>ruler</p> <p>measuring cup</p> <p>scale</p>
<p>the weight of a calculator</p>  <p>ruler</p> <p>measuring cup</p> <p>scale</p>	