

Revision 3

What percentage of £5 is 50p?

- A 1% B 5% C 10% D 20% E 50%

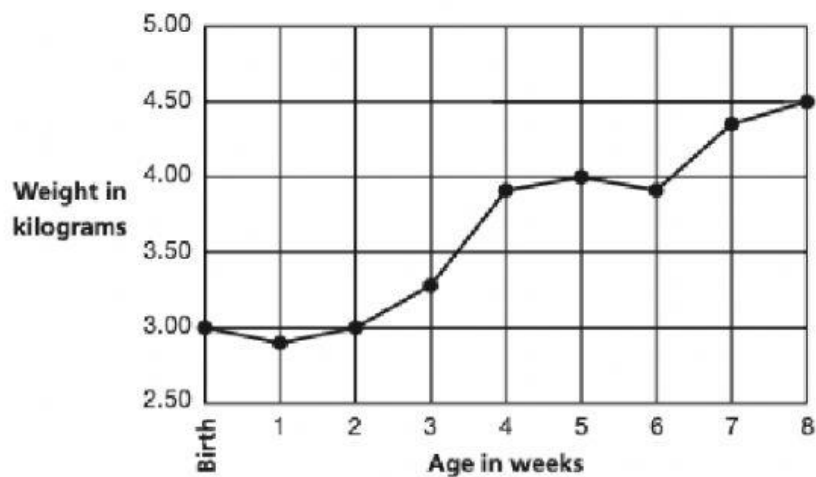
Here is part of a train timetable.

Purley	23:21
East Croydon	22:56	23:01	23:10	23:27	23:30
Norwood Junc.
London Bridge
Clapham Junc.	23:07	23:13	23:21	23:37	23:40
Victoria	23:12	23:18	23:27	23:43	23:45

A train leaves East Croydon at 23:27.

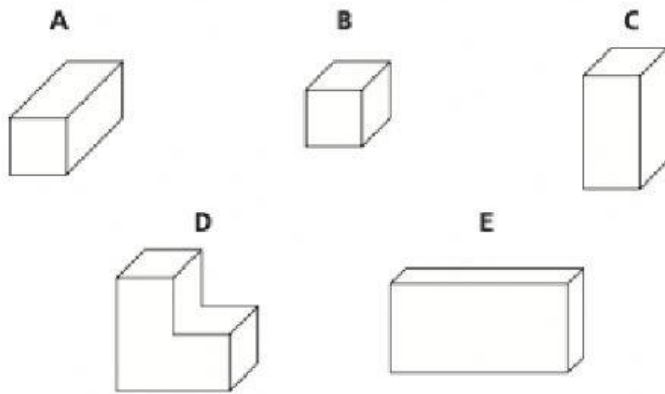
How long does it take to get to Victoria?

The graph shows the weight of a baby girl in the first 8 weeks of her life.



How old was the baby at the end of the week in which she gained most weight?

- A 2 weeks B 3 weeks C 4 weeks D 7 weeks E 8 weeks

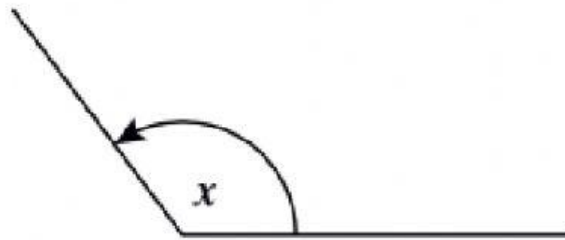


Which of these shapes is NOT a cuboid?

$$105 \div \nabla = 21$$

What number does ∇ stand for?

Look at this angle.



Select the correct answer.

- A Angle x is less than 90 degrees.
- B Angle x is a right angle.
- C Angle x is more than 180 degrees.
- D Angle x is between 90 and 180 degrees.
- E Angle x is 180 degrees.

A boy delivered newspapers.
He was paid £1.40 for every 100 papers he delivered.

How much was he paid for delivering 250 papers?

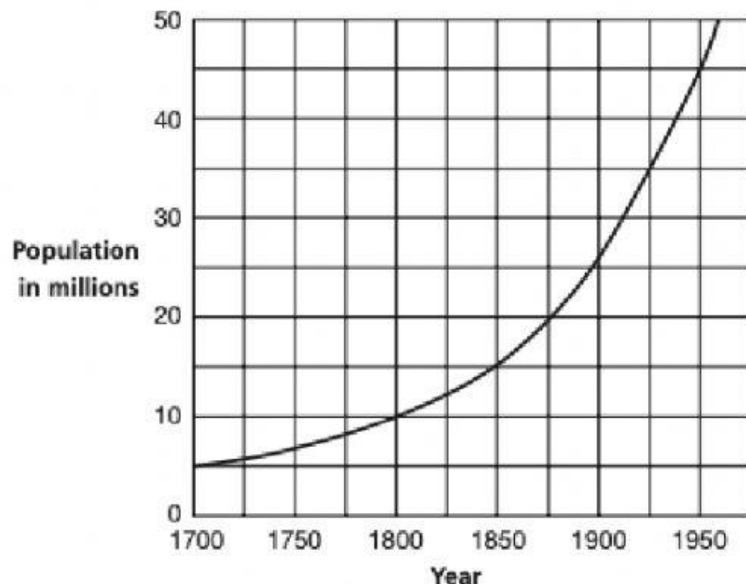
A swimming pool charges £3.60 for entry.
You can save $\frac{1}{3}$ of the entry fee with a membership card.
On his first visit, Ken spends £5 on a membership card plus the reduced entry fee.

How many times does Ken visit before he gets back his £5?

- A** 4 **B** 2 **C** 5 **D** 1 **E** 3

$3.6 \times 10 =$

The graph shows the population of Britain from 1700.



In which year was the population twice as much as it was in 1800?