

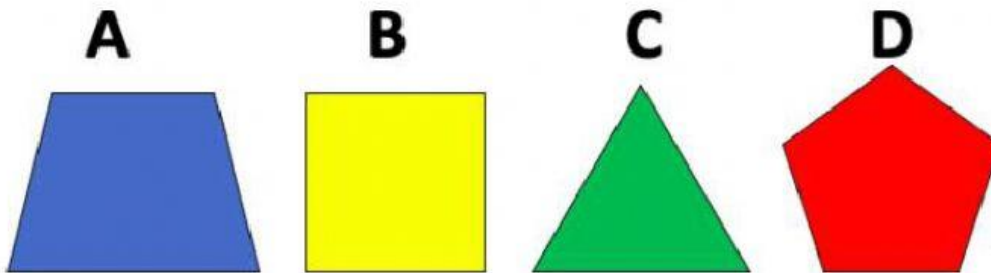
Revision 2

1. What is 8 doubled?


2. Which number has a 6 in the thousands column?

A	B	C	D
32623	9867	26801	61010

3. Which shape has only right angles?



4. What fraction of this shape is yellow?




5. What is $3236 + 564$?

6. A pack of 30 sweets is shared evenly to 5 people. How many does each person get?

7. If there are 6 eggs in 1 box, how many eggs are there in 7 boxes?

8. What is the missing number?



9. What number is halfway between 45 and 59?

10. Which of these is an equivalent fraction for one half?

A	B	C	D
$\frac{3}{5}$	$\frac{2}{1}$	$\frac{5}{10}$	$\frac{4}{9}$