
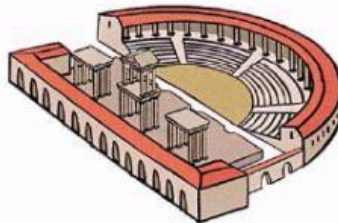
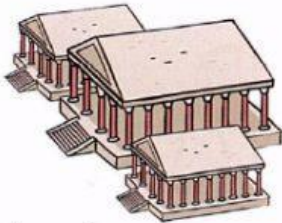
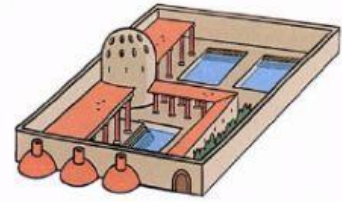
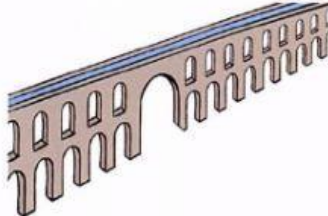



Life in Hispania

1. Label the parts of a Roman city.



2. Complete the text about Roman cities.

amphitheatres aqueducts baths circus
forum temple theatre walled

Roman cities in Hispania were _____.

The most important buildings were in the main square, which they called the _____.

There were many buildings for entertainment. The Romans watched plays at the _____, sports and other performances at the _____ and races in _____.

There were constructions for daily needs. For example, people went to wash at the _____, and they worshipped Roman gods at the _____. The Romans also built arches, bridges and _____ to transport water.