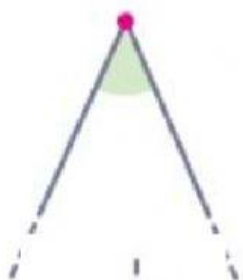



ALUNNO : \_\_\_\_\_ classe: \_\_\_\_\_

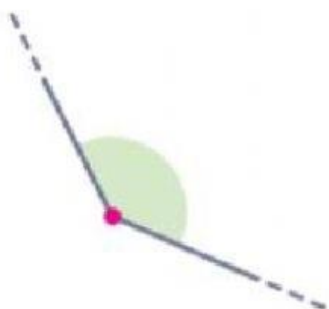
SCRIVI NOME DELL' ANGOLO E SUA AMPIEZZA: USA  $<$ ,  $>$ ,  $=$



--	--



--	--



--	--



--	--



--	--