

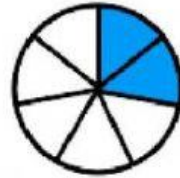
Nombre: _____ Fecha: _____ Grupo: _____

Valor: ____/48 Nota: ____%__

Escribe la fracción de cada figura.



—



—



—



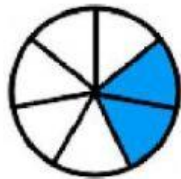
—



—



—



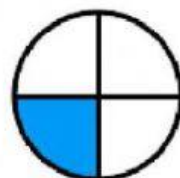
—



—



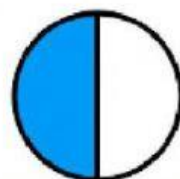
—



—

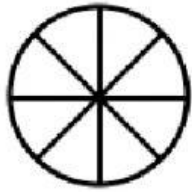


—

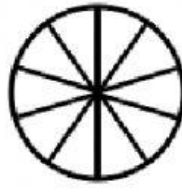


—

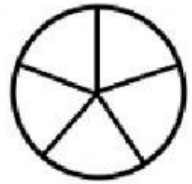
Colorea cada figura con su fracción.



$$\frac{6}{8}$$




$$\frac{4}{10}$$



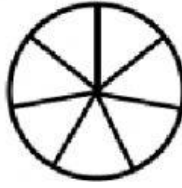
$$\frac{4}{5}$$



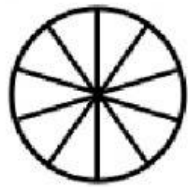
$$\frac{5}{6}$$



$$\frac{3}{9}$$



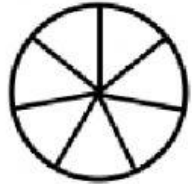
$$\frac{5}{7}$$



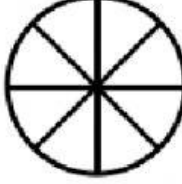
$$\frac{7}{10}$$



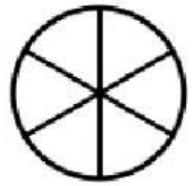
$$\frac{1}{5}$$




$$\frac{2}{7}$$



$$\frac{3}{8}$$



$$\frac{1}{6}$$



$$\frac{6}{9}$$