




Choose the correct answer.

1. Which object is the shortest?

- a. 
- b. 
- c. 

2. Which object is the longest?

- a. 
- b. 
- c. 

3. Who is the tallest?



- a. Sarah
- b. Mike
- c. Joey

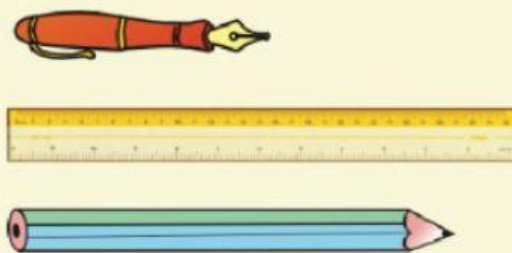
4. Who is the shortest?



Tom Ann Ben

- a. Tom
- b. Ann
- c. Ben

5. Which object is the longest?



- a. Pencil
- b. Pen
- c. Ruler