

Name: _____

Date: _____

TEKS 3.4C Counting Money Practice #1

1 Lisa has the following bills and coins in her piggy bank.



What is the value of the collection of bills and coins?

A \$6.98

C \$6.78

B \$6.73

D \$7.08

2 Jason had the following coins in his pocket.



What is the value of the coins Jason had in his pocket?

A \$1.92

C \$1.78

B \$1.63

D \$1.72

3 Kevin bought a package of cupcakes. He received the following change.



How much change did Kevin receive?




A \$1.23

C \$1.25

B \$1.33

D \$1.13

4 Daniel used the money shown to buy lunch.



How much did Daniel pay for his lunch?

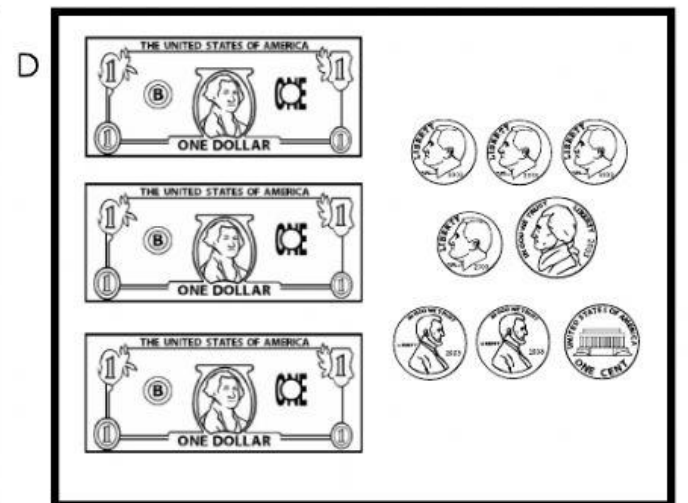
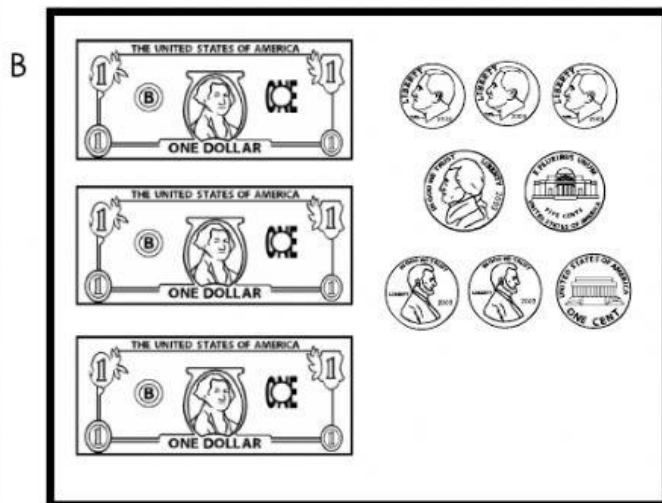
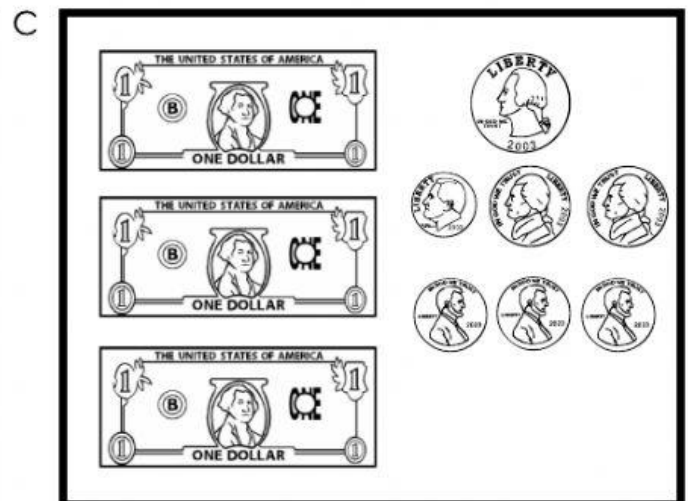
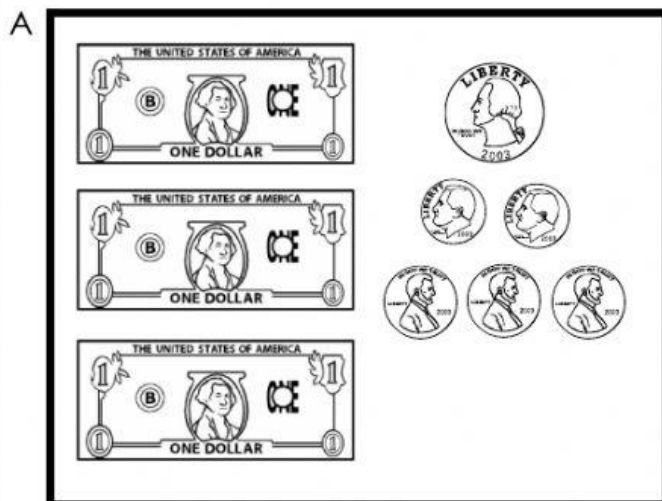
A \$8.59

C \$9.39


B \$8.49

D \$8.29

5 Carmen has \$3.48 in her purse. Which set of bills and coins could NOT be the money Carmen has in her purse?



6 Julie earned the money shown from doing chores around the house.



How much money did Julie earn?

A \$25.60

C \$15.70

B \$15.50

D \$15.60

7 Fernando used the money shown to buy a snack.



How much did Fernando pay for the snack?

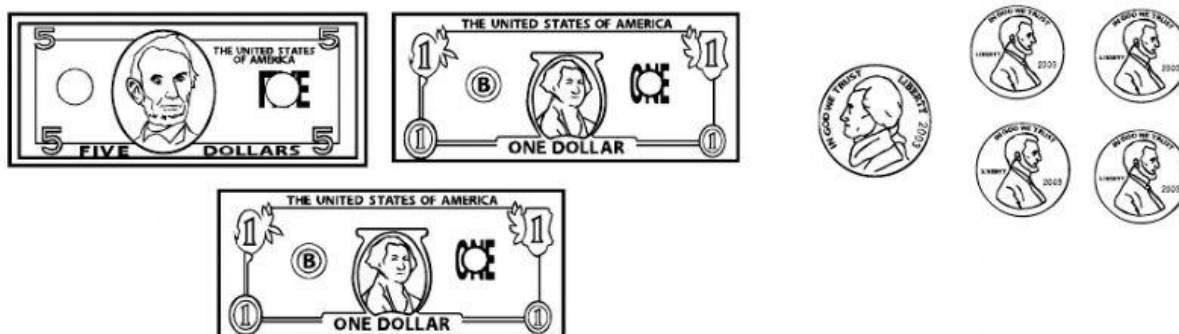
A \$2.67

C \$3.07

B \$2.87

D \$2.62

8 Olivia used the money shown to purchase a bucket of popcorn at the movie theater.



How much did Olivia pay to the bucket of popcorn?

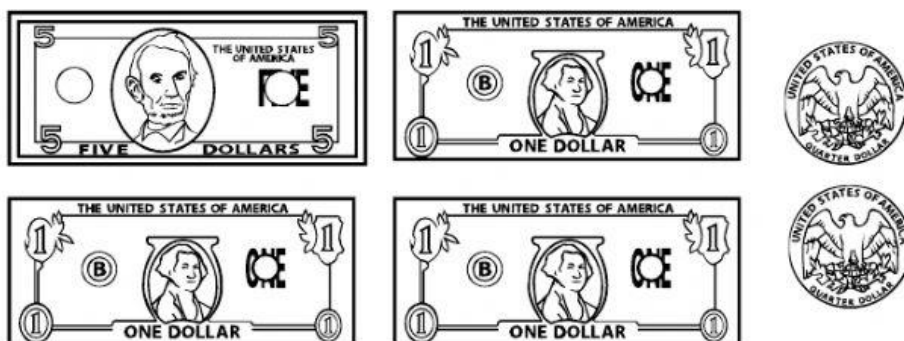
A \$7.80

C \$7.09

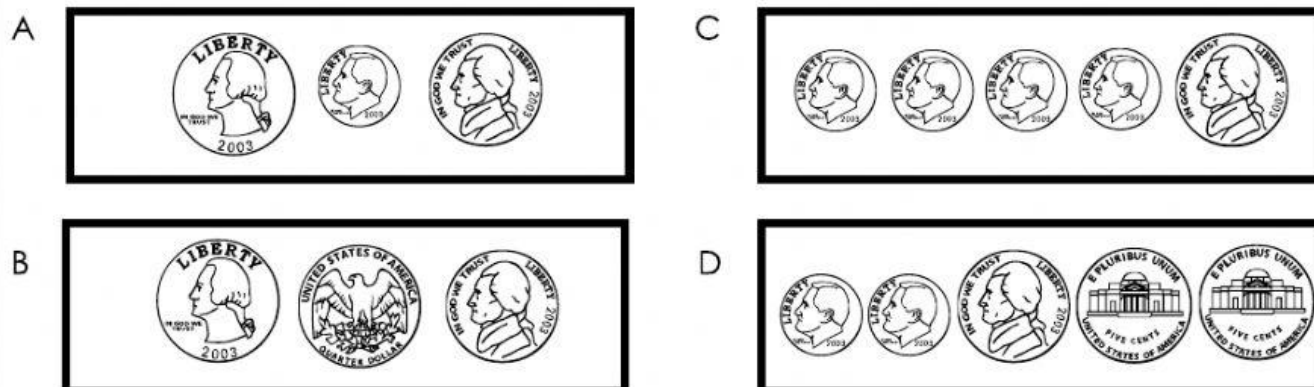
B \$7.08

D \$7.18


9 Ashley needs \$8.95 to purchase a sketch pad. The money shows the money she currently has saved.



Which set of coins could be added Ashley's money to complete \$8.95 she needs to buy the sketchpad?



10 Edgar spent the money shown at the mall.



How much money did Edgar spend at the mall?

- A \$3.82
- B \$30.82
- C \$22.82
- D \$30.87