



MATH PRACTICE  
IV QUARTER  
Fourth Grade C  
Week of April 18<sup>th</sup> to April 22<sup>nd</sup>, 2022



Name: \_\_\_\_\_  
Name: \_\_\_\_\_

Date: \_\_\_\_/\_\_\_\_/\_\_\_\_

**Faces, Edges & Vertices**

Write the name of each shape. Also, find the number of faces, edges and vertices.

1)



Faces   
Edges   
Vertices

Name: \_\_\_\_\_

2)



Faces   
Edges   
Vertices

Name: \_\_\_\_\_

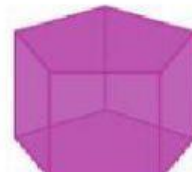
3)



Faces   
Edges   
Vertices

Name: \_\_\_\_\_

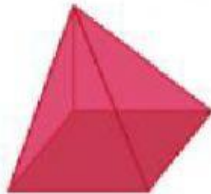
4)



Faces   
Edges   
Vertices

Name: \_\_\_\_\_


5)



Faces   
Edges   
Vertices

Name: \_\_\_\_\_

6)



Faces   
Edges   
Vertices

Name: \_\_\_\_\_

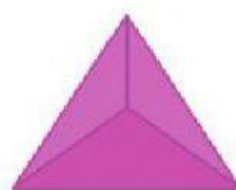
7)



Faces   
Edges   
Vertices

Name: \_\_\_\_\_

8)



Faces   
Edges   
Vertices

Name: \_\_\_\_\_