



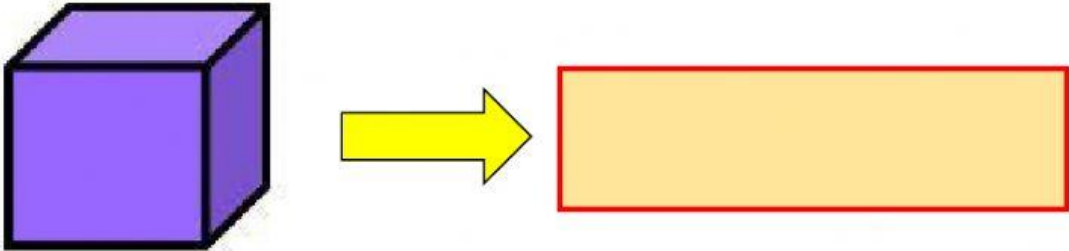
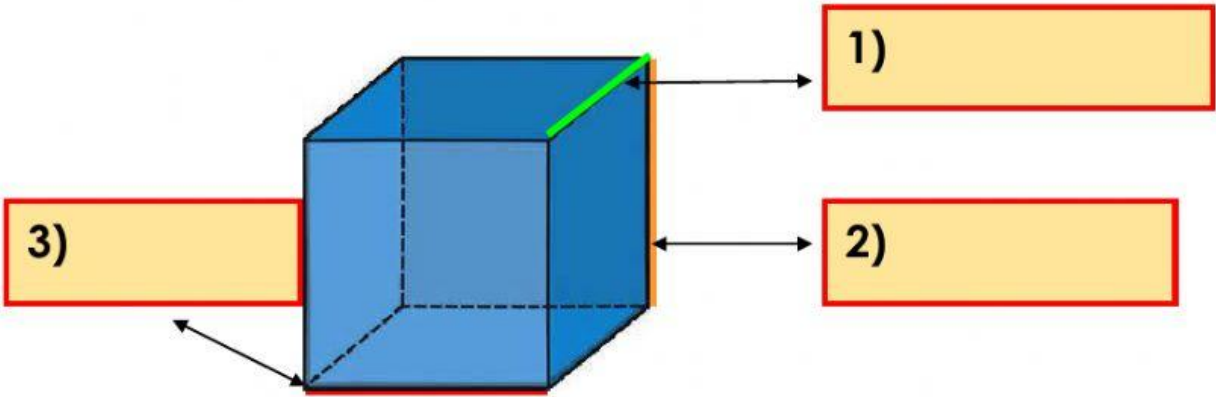
## Topic : Solids

Go figure it out smartly !



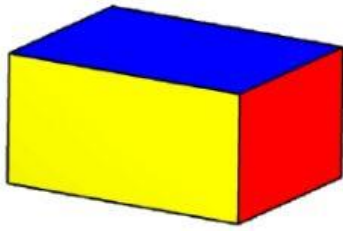
Can you name the solid ?

Can you label each solid for its length, width and height ?

Easy question	<input checked="" type="checkbox"/>	Medium question	<input checked="" type="checkbox"/>	Challenging question
1)	<b>(a) What do you call this solid ?</b>			
				
<div><div>A Cuboid</div><div>C Pyramid</div><div>B Prism</div><div>D Cube</div></div>				
<b>(b) Can you label each side ?</b>				
<div>length      width      height</div>				
				



2) (a) What do you call this solid ?



A Cuboid

C Pyramid

B Prism

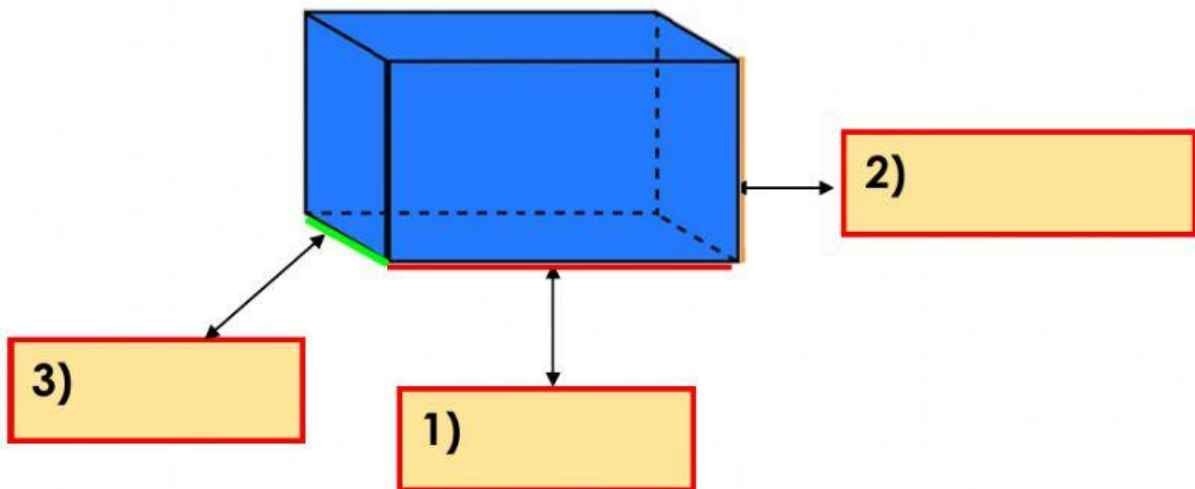
D Cube

(b) Can you label each side ?

length

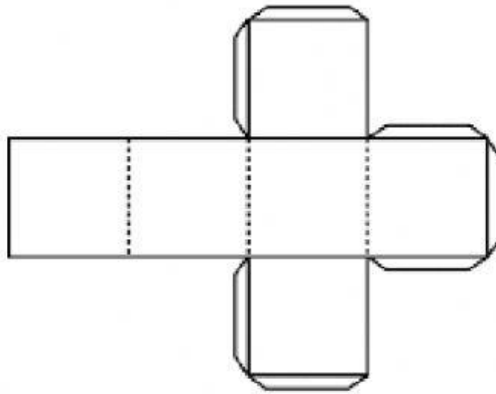
width

height





3) Study this solid net and answer the following questions.



**Question 1 :**

How many **faces** does this solid have ?

This solid has  faces.

**Question 2 :**

How many **edges** does this solid have ?

This solid has  edges.

**Question 3 :**

How many **vertices** does this solid have ?

This solid has  vertices.



Good  
Luck

The End

