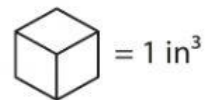


Name : _____

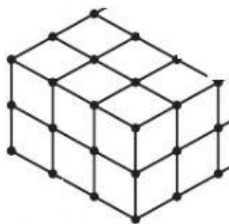
Volume - Counting Cubes

Sheet 1

Count the unit cubes and find the volume of each prism.



1)




Volume = _____

2)



Volume = _____

3)



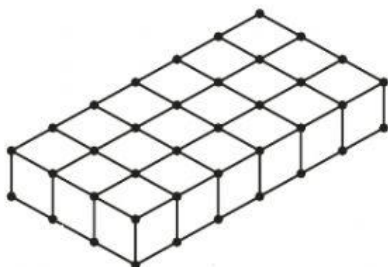
Volume = _____

4)



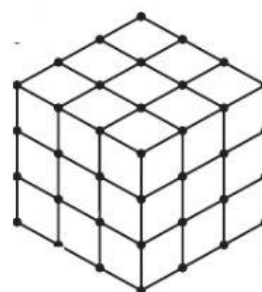
Volume = _____

5)



Volume = _____

6)



Volume = _____