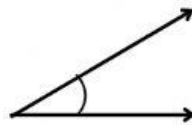
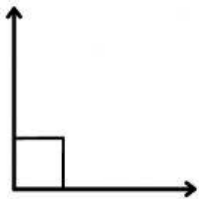


Name: \_\_\_\_\_ Date: \_\_\_\_\_

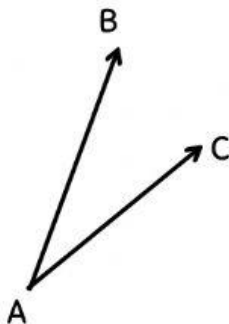


# NAME THAT ANGLE!

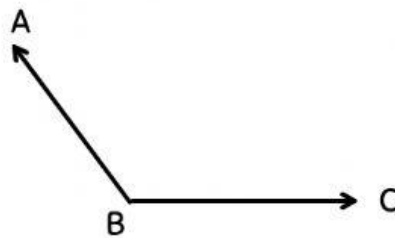
Identify the angles below. Label each angle as acute, obtuse, right, or straight.



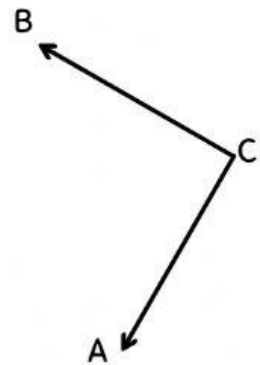
Drag and drop the right names for the angles below.



$\angle ABC$



$\angle CAB$



$\angle BCA$