

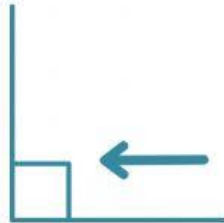
Name: \_\_\_\_\_ Date: \_\_\_\_\_

# Right, Acute, and Obtuse Angles



less than a  
right angle

Angles that are less than a right angle are called acute angles.



right angle


A right angle is 90 degrees.



more than a  
right angle

Angles that are more than a right angle are called obtuse angles.

Check each of these angles and decide if they are right angles, acute angles, or obtuse angles.



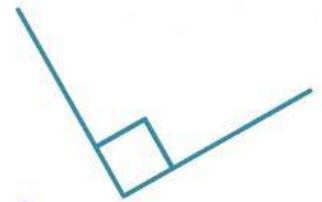
1.

\_\_\_\_\_



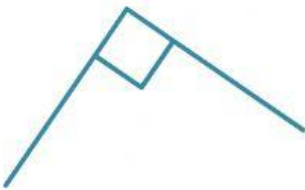
2.

\_\_\_\_\_



3.

\_\_\_\_\_



4.

\_\_\_\_\_



5.

\_\_\_\_\_



6.

\_\_\_\_\_