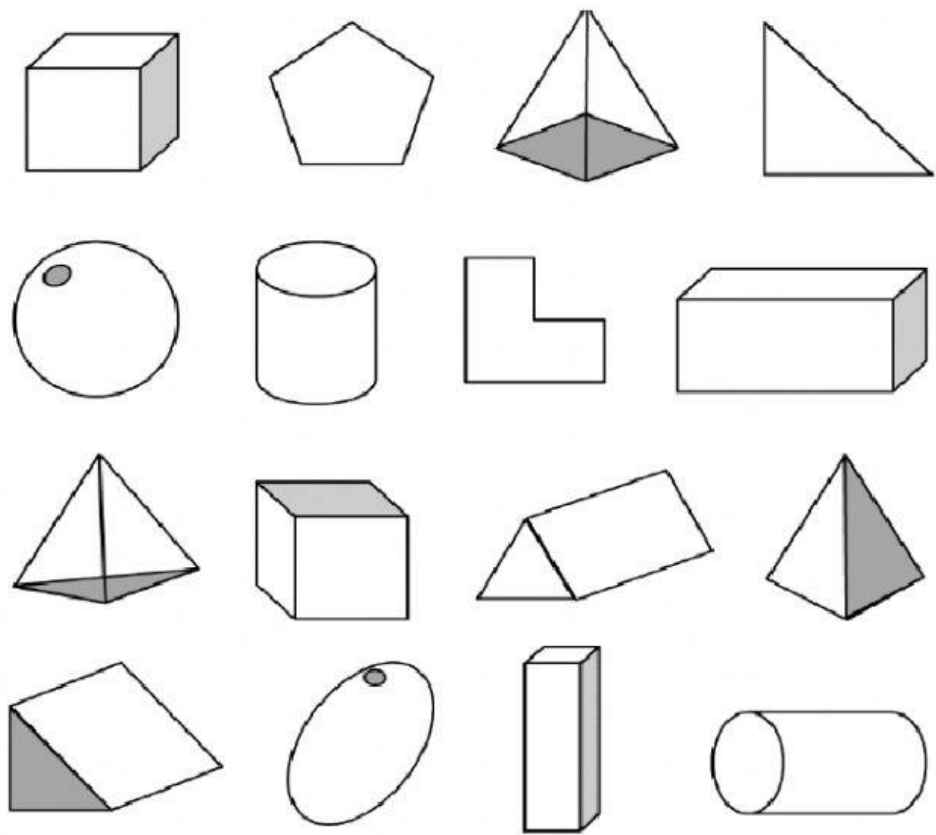
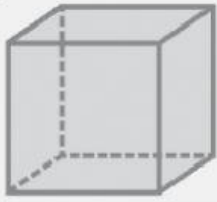


1. Select the 3-D shapes.



2. Name each 3-D shape and write down the number of faces, vertices and edges.

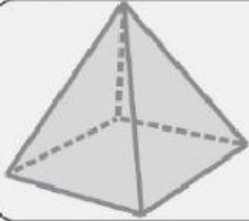


Name: \_\_\_\_\_

Edges: \_\_\_\_\_

Faces: \_\_\_\_\_

Vertices: \_\_\_\_\_

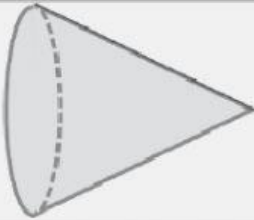


Name: \_\_\_\_\_

Edges: \_\_\_\_\_

Faces: \_\_\_\_\_

Vertices: \_\_\_\_\_

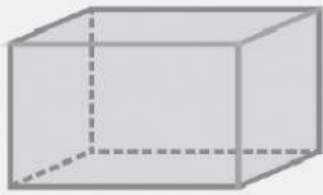


Name: \_\_\_\_\_

Edges: \_\_\_\_\_

Faces: \_\_\_\_\_

Vertices: \_\_\_\_\_

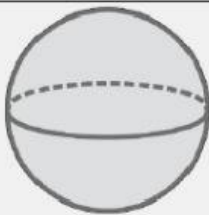


Name: \_\_\_\_\_

Edges: \_\_\_\_\_

Faces: \_\_\_\_\_

Vertices: \_\_\_\_\_



Name: \_\_\_\_\_

Edges: \_\_\_\_\_

Faces: \_\_\_\_\_

Vertices: \_\_\_\_\_