

## TOPIC: DIVISION

### Solving Word Problems

1. Dayang Munirah bakes 20 cakes. She puts 5 cakes on each plate. How many plates are used?

$$\square \div \square = \square$$


She uses  plates.



2. Harun's mother makes 12 sandwiches for a picnic. She shares them equally with Harun and his father. How many sandwiches does each of them get?

$$\square \div \square = \square$$


Each of them gets  sandwiches.



3. A teacher has 30 pencils. One box can hold 5 pencils. How many boxes does she need for all the pencils?

$$\square \div \square = \square$$

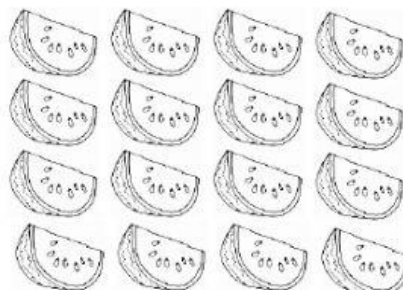
She needs  boxes.



4. Haji Ali cuts a watermelon into 16 slices. He wants to share them equally with his 3 children. How many slices of watermelon does each of them get?

$$\boxed{\phantom{00}} \div \boxed{\phantom{00}} = \boxed{\phantom{00}}$$


Each child gets  slices.



5. Eliza has 24 lollipops. She packs 6 lollipops in each bag. How many bags are needed?

$$\boxed{\phantom{00}} \div \boxed{\phantom{00}} = \boxed{\phantom{00}}$$

There are  bags needed.



6. Haji Idris has 30 carrots. He arranges them in bunches of 5 carrots. How many bunches of carrots are there?

$$\boxed{\phantom{00}} \div \boxed{\phantom{00}} = \boxed{\phantom{00}}$$

There are  bunches of carrots.

