



Formative Assessment

Name: _____

I. Complete the sequences with the missing numbers.

a.


b.


c.


II. Order the numbers from SMALLEST to BIGGEST




III. Write the number that is represented.



a.  \rightarrow

b.  \rightarrow



c.  \rightarrow

d.  \rightarrow

IV. Count and add.

a.  $+$ 

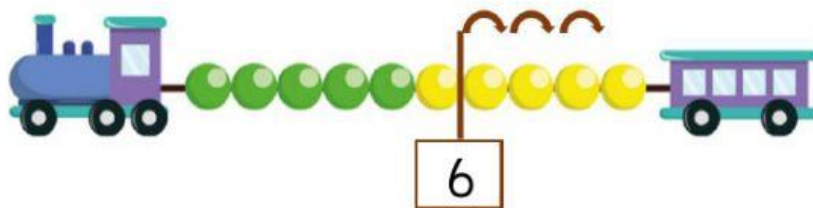
$+$ $=$

b.  $+$ 

$+$ $=$

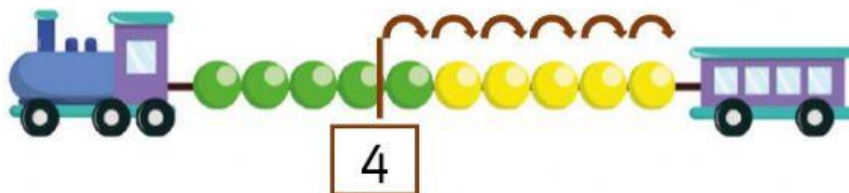


c.



$$\underline{\quad\quad} + \underline{\quad\quad} = \underline{\quad\quad}$$

d.



$$\underline{\quad\quad} + \underline{\quad\quad} = \underline{\quad\quad}$$

V. Add and write the number

a. $\begin{array}{c} \textcircled{6} \xrightarrow{+1} \textcircled{\quad} \end{array}$

b. $\begin{array}{c} \textcircled{9} \xrightarrow{+2} \textcircled{\quad} \end{array}$

c. $\begin{array}{c} \textcircled{13} \xrightarrow{+1} \textcircled{\quad} \end{array}$

d. $\begin{array}{c} \textcircled{15} \xrightarrow{+2} \textcircled{\quad} \end{array}$