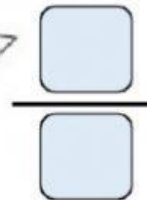
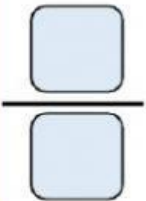
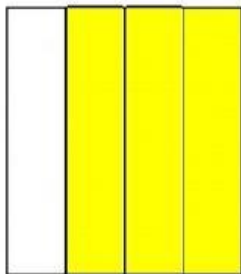
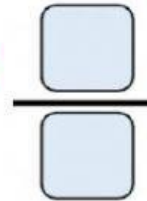
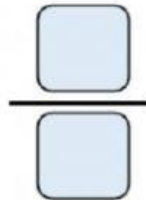
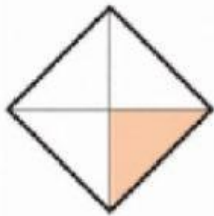
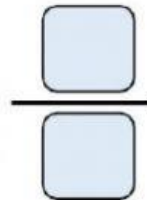

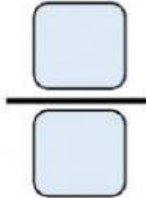
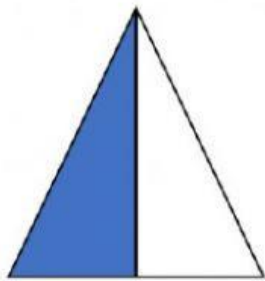


## Unit 7: Fractions

Q.1 Write the fraction that presents the colored part of the following shapes.



Q.2 Complete the following:

a)  $\frac{1}{2}$  of 10 is \_\_\_\_

b)  $\frac{1}{4}$  of 16 is \_\_\_\_