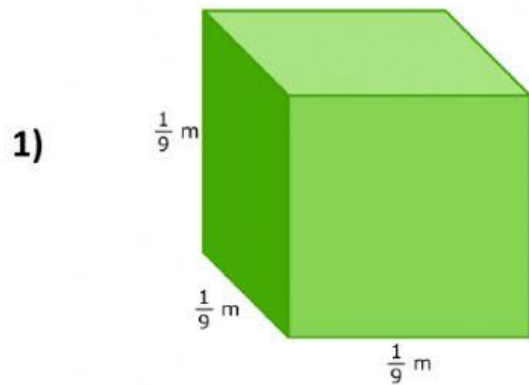


4/11 Monday Part I Live Worksheet

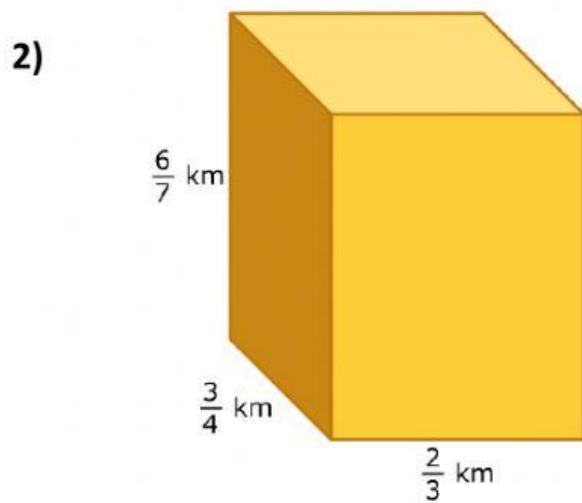
Name: _____

Find the volume of the rectangular prism.



Write your answer as a whole number, a proper fraction, or a mixed number.

cubic meters

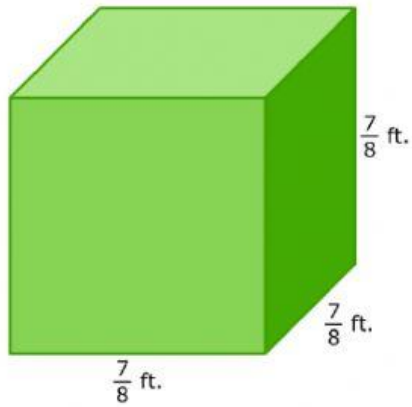


Write your answer as a whole number, a proper fraction, or a mixed number.

cubic kilometers

3)

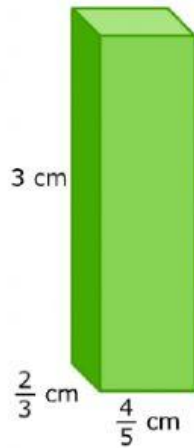
Find the volume of the cube.



Write your answer as a whole number, a proper fraction, or a mixed number.

cubic feet


4)



Write your answer as a whole number, a proper fraction, or a mixed number.

cubic centimeters

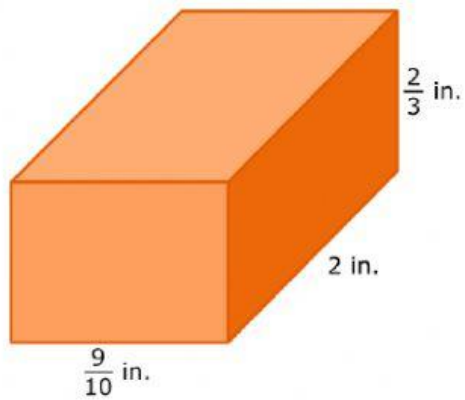
5)



Write your answer as a whole number, a proper fraction, or a mixed number.

cubic feet

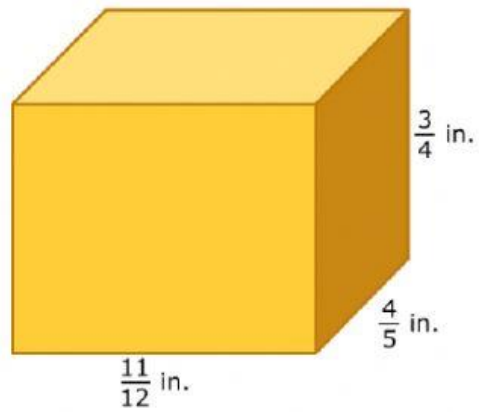
6)



Write your answer as a whole number, a proper fraction, or a mixed number.

cubic inches

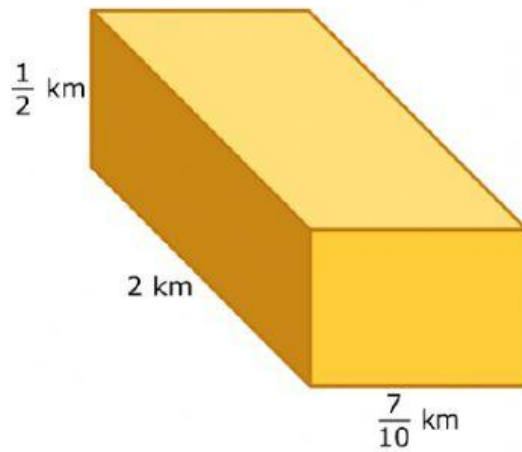
7)



Write your answer as a whole number, a proper fraction, or a mixed number.

cubic inches

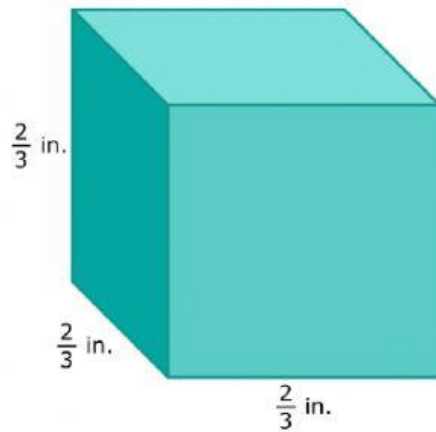
8)



Write your answer as a whole number, a proper fraction, or a mixed number.

cubic kilometers

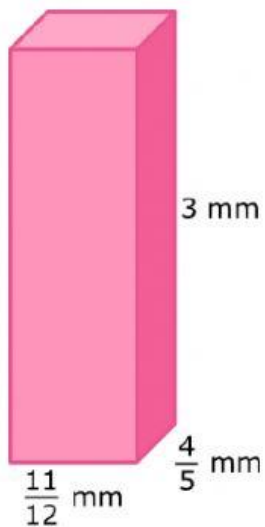
9)



Write your answer as a whole number, a proper fraction, or a mixed number.

cubic inches

10)



Write your answer as a whole number, a proper fraction, or a mixed number.

cubic millimeters